

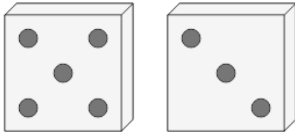


Math worksheet on 'Probability - Dice (2), Not All Specific, To Fraction (Level 1)'. Part of a broader unit on 'Probability and Counting - Multiple Events - Practice'

Learn online:

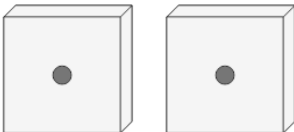
app.mobius.academy/math/units/probability_counting_multiple_event_practice/

1 What is the chance of NOT rolling double 3's on these dice?



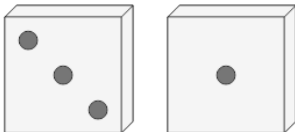
a	2	b	13	c	63
	—————		—————		—————
	29		5		11
d	60	e	54	f	35
	—————		—————		—————
	63		45		36

2 What is the chance of NOT rolling double 1's on these dice?



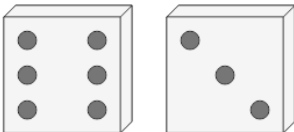
a	67	b	35	c	9
	—————		—————		—————
	59		36		40
d	42	e	51	f	64
	—————		—————		—————
	19		24		26

3 What is the chance of NOT rolling double 4's on these dice?



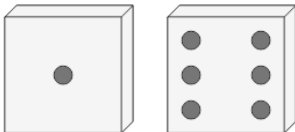
a	53	b	40	c	40
	—————		—————		—————
	6		55		71
d	63	e	60	f	35
	—————		—————		—————
	39		31		36

4 What is the chance of NOT rolling double 3's on these dice?



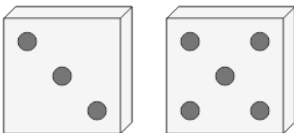
a	3	b	17	c	49
	—————		—————		—————
	48		70		22
d	35	e	54	f	35
	—————		—————		—————
	73		5		36

5 What is the chance of NOT rolling double 2's on these dice?



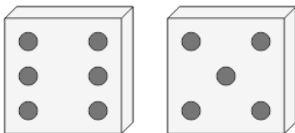
a	35	b	14	c	48
	—————		—————		—————
	36		25		55
d	7	e	3	f	61
	—————		—————		—————
	75		40		37

6 What is the chance of NOT rolling double 6's on these dice?



a	63	b	20	c	8
	—————		—————		—————
	61		64		36
d	37	e	35	f	25
	—————		—————		—————
	19		36		14

7 What is the chance of NOT rolling double 2's on these dice?



a	35	b	52	c	36
	—————		—————		—————
	36		48		44
d	25	e	46	f	11
	—————		—————		—————
	22		54		46