

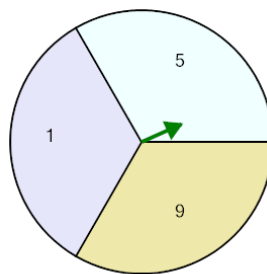


Math worksheet on 'Probability - Spinner, One Spin, Single Answer, To Percent (Level 1)'. Part of a broader unit on 'Probability and Counting - Single Event - Practice'

Learn online:

app.mobius.academy/math/units/probability_counting_single_event_practice/

1

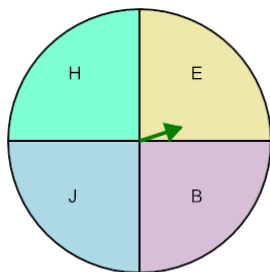


P(9)

Calculate the probability of spinning 9. Show as a percent

a	100%	b	133%
c	31%	d	300%
e	29%	f	33%

2

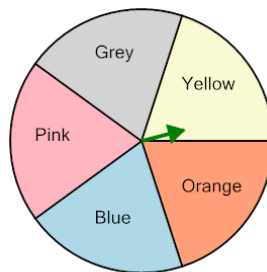


P(H)

Calculate the probability of spinning H. Show as a percent

a	20%	b	75%
c	125%	d	25%
e	23%	f	50%

3

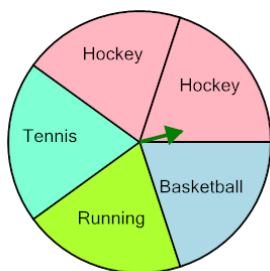


P(Orange)

Calculate the probability of spinning Orange. Show as a percent

a	40%	b	25%
c	20%	d	80%
e	13%	f	100%

4

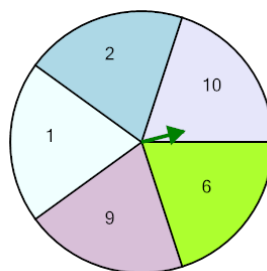


P(Running)

Calculate the probability of spinning Running. Show as a percent

a	20%	b	18%
c	100%	d	60%
e	50%	f	40%

5

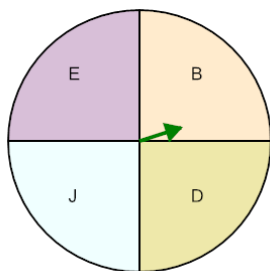


P(10)

Calculate the probability of spinning 10. Show as a percent

a	16%	b	100%
c	23%	d	20%
e	60%	f	80%

6

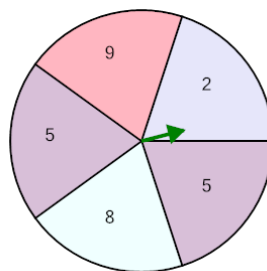


P(B)

Calculate the probability of spinning B. Show as a percent

a	50%	b	100%
c	29%	d	75%
e	125%	f	25%

7



P(9)

Calculate the probability of spinning 9. Show as a percent

a	23%	b	60%
c	80%	d	16%
e	20%	f	100%