

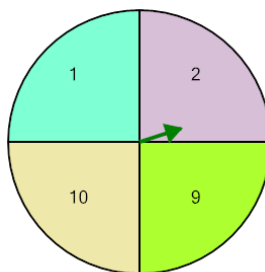


Math worksheet on 'Probability - Spinner, Two Spins, Both Answers, To Percent (Level 1)'. Part of a broader unit on 'Probability and Counting - Multiple Events - Practice'

Learn online:

app.mobius.academy/math/units/probability_counting_multiple_event_practice/

1

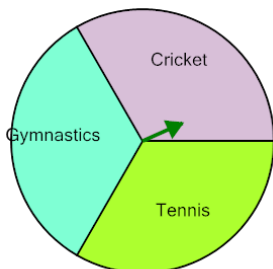


P(2 twice)

Calculate the probability of spinning 2 twice in a row. Show as a percent

a	31%	b	25%
c	6%	d	5%
e	0%	f	9%

2

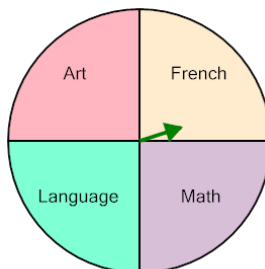


P(Cricket twice)

Calculate the probability of spinning Cricket twice in a row. Show as a percent

a	11%	b	22%
c	12%	d	13%
e	20%	f	9%

3

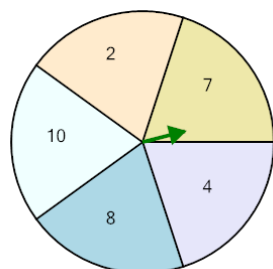


P(Language twice)

Calculate the probability of spinning Language twice in a row. Show as a percent

a	5%	b	13%
c	25%	d	6%
e	0%	f	7%

4

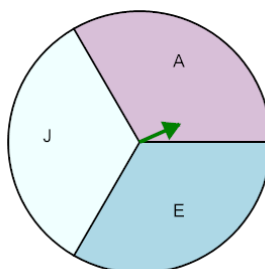


P(7 twice)

Calculate the probability of spinning 7 twice in a row. Show as a percent

a	4%	b	3%
c	20%	d	8%
e	16%	f	12%

5

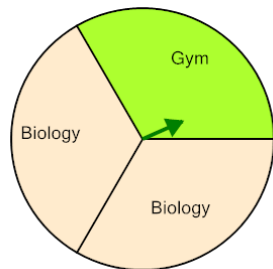


P(A twice)

Calculate the probability of spinning A twice in a row. Show as a percent

a	13%	b	8%
c	10%	d	22%
e	11%	f	56%

6

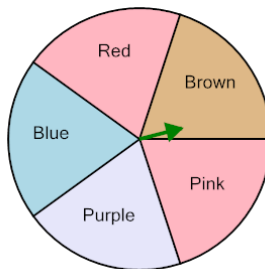


P(Gym twice)

Calculate the probability of spinning Gym twice in a row. Show as a percent

a	33%	b	12%
c	11%	d	10%
e	44%	f	8%

7



P(Pink twice)

Calculate the probability of spinning Pink twice in a row. Show as a percent

a	4%	b	16%
c	8%	d	5%
e	20%	f	0%