

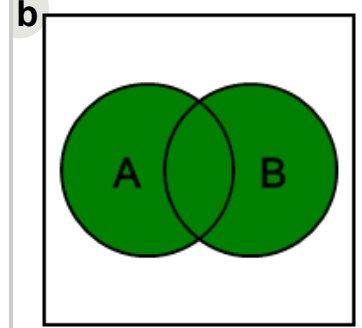
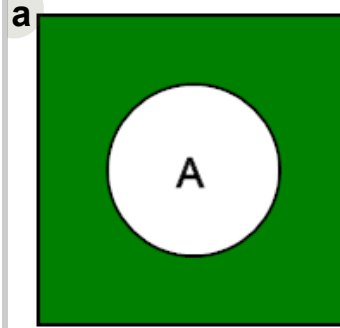


Math worksheet on 'Probability Union, Intersection, Complement - Name to Venn Diagram (Level 1)'.  
Part of a broader unit on 'Probability - Set Operations - Intro'

Learn online: [app.mobius.academy/math/units/probability\\_set\\_operations\\_intro/](http://app.mobius.academy/math/units/probability_set_operations_intro/)

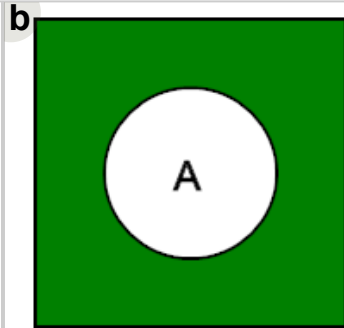
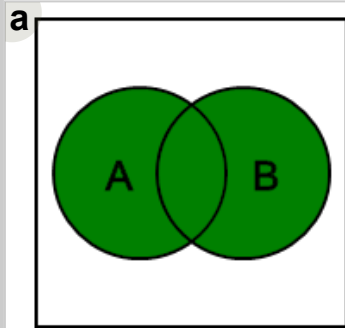
**1** Which Venn diagram represents this probability set operation

A union B



**2** Which Venn diagram represents this probability set operation

Complement of A



**3** Which Venn diagram represents this probability set operation

A intersect B

