




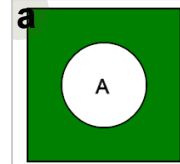
Math worksheet on 'Probability Union, Intersection, Complement - Set Operation to Venn Diagram (Level 1)'. Part of a broader unit on 'Probability - Set Operations - Practice'

Learn online: app.mobius.academy/math/units/probability_set_operations_practice/

1

$$P(A')$$

Which Venn diagram represents this probability set operation



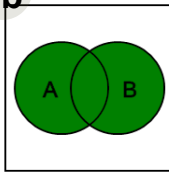
2

$$P(A \cup B)$$

a



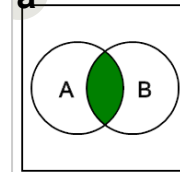
b



3

$$P(A \cap B)$$

a



b

