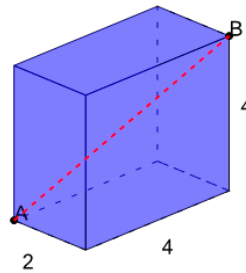




Math worksheet on 'Pythagorean Theorem 3D - Prism - Dimensions to Hypotenuse (Full) (Level 1)'.
Part of a broader unit on 'Pythagorean Theorem in 3D - Intro'

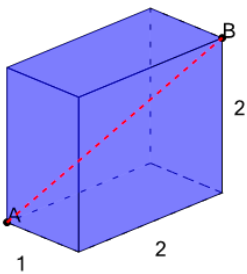
Learn online: app.mobius.academy/math/units/pythagoras_3d_intro/

1 What is the distance from point A to point B on this Rectangular Prism?



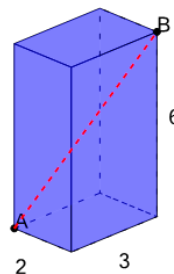
a	b	c
1	5	6
d	e	f
15	7	10

2 What is the distance from point A to point B on this Rectangular Prism?



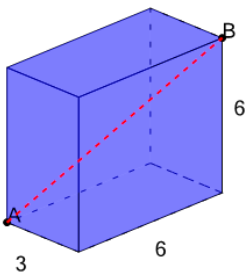
a	b	c
8	11	3
d	e	f
2	4	7

3 What is the distance from point A to point B on this Rectangular Prism?



a	b	c
13	2	4
d	e	f
5	7	3

4 What is the distance from point A to point B on this Rectangular Prism?



a	b	c
1	16	13
d	e	f
9	10	5