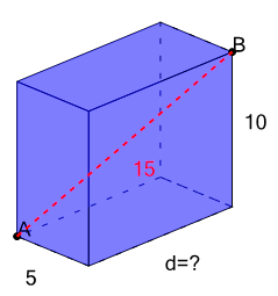




Math worksheet on 'Pythagorean Theorem 3D - Prism - Hypotenuse to Dimension (Full) (Level 3)'. Part of a broader unit on 'Pythagorean Theorem in 3D - Intro'

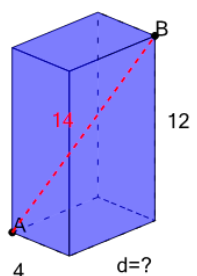
Learn online: app.mobius.academy/math/units/pythagoras_3d_intro/

1 The distance from point A to point B is 15. What is the depth?



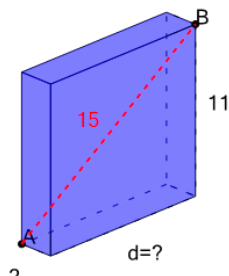
a	b	c
15	6	9
d	e	f
10	12	5

2 The distance from point A to point B is 14. What is the depth?



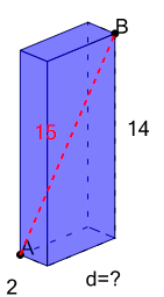
a	b	c
6	1	13
d	e	f
4	3	5

3 The distance from point A to point B is 15. What is the depth?



a	b	c
13	10	1
d	e	f
16	12	3

4 The distance from point A to point B is 15. What is the depth?



a	b	c
4	5	1
d	e	f
13	7	10