

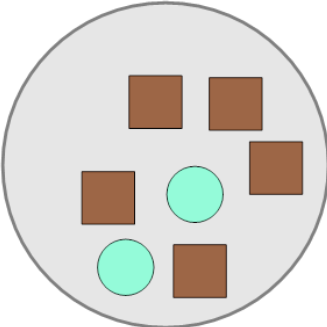


Math worksheet on 'Ratios - Calculate Item Ratio from Values (From Image) (Level 1)'. Part of a broader unit on 'Rates and Ratios - Intro'

Learn online: app.mobius.academy/math/units/rates_and_ratios_intro/

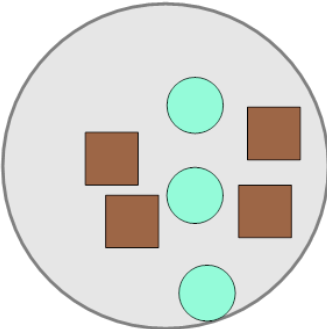
1 What is the (simplest) ratio of circles to squares?

a	b	c
2:5	9:1	6:6
d		
3:9		



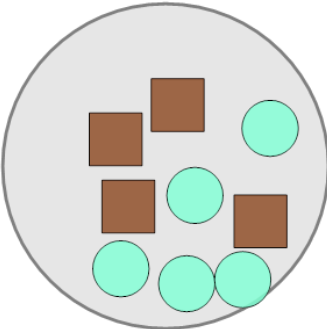
2 What is the (simplest) ratio of circles to squares?

a	b	c
3:4	10:8	1:2
d		
5:2		



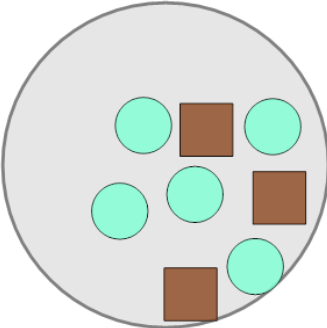
3 What is the (simplest) ratio of circles to squares?

a	b	c
10:3	5:4	1:7
d		
2:12		



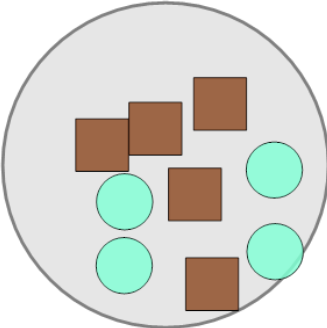
4 What is the (simplest) ratio of circles to squares?

a	b	c
8:11	3:5	5:3
d		
2:10		



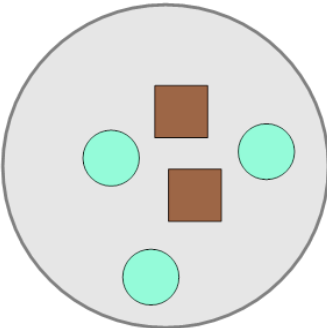
5 What is the (simplest) ratio of circles to squares?

a	b	c
4:5	13:3	7:3
d		
9:9		



6 What is the (simplest) ratio of circles to squares?

a	b	c
7:11	6:4	3:2
d		
9:3		



7 What is the (simplest) ratio of circles to squares?

a	b	c
5:4	6:5	4:12
d		
13:1		

