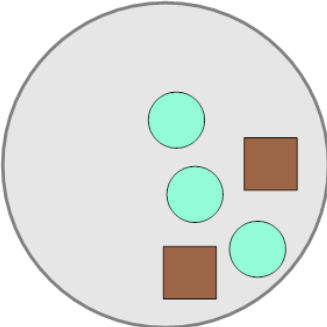




Math worksheet on 'Ratios - Calculate Total Ratio from Values (From Image) (Level 1)'. Part of a broader unit on 'Rates and Ratios - Intro'

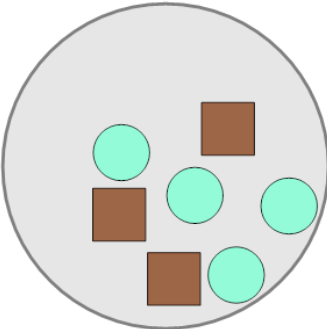
Learn online: app.mobius.academy/math/units/rates_and_ratios_intro/

1 What is the (simplest) ratio of squares to ALL shapes?



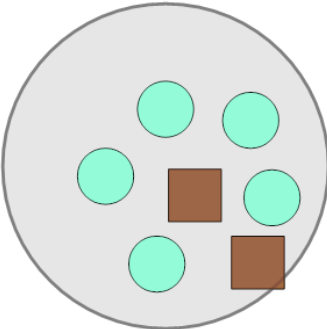
a	b	c
1:7	7:9	2:5
d		
3:11		

2 What is the (simplest) ratio of squares to ALL shapes?



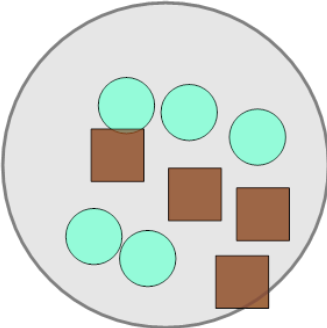
a	b	c
6:16	12:10	3:7
d		
11:8		

3 What is the (simplest) ratio of circles to ALL shapes?



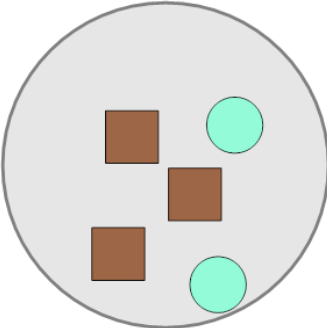
a	b	c
14:13	5:7	7:10
d		
2:11		

4 What is the (simplest) ratio of circles to ALL shapes?



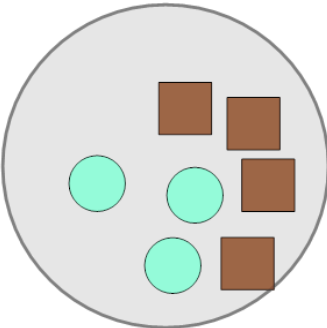
a	b	c
5:9	13:1	13:16
d		
9:13		

5 What is the (simplest) ratio of squares to ALL shapes?



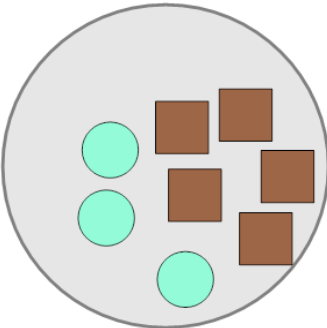
a	b	c
5:13	7:11	3:5
d		
7:3		

6 What is the (simplest) ratio of squares to ALL shapes?



a	b	c
10:3	6:10	4:7
d		
8:6		

7 What is the (simplest) ratio of squares to ALL shapes?



a	b	c
14:7	3:16	10:15
d		
5:8		