

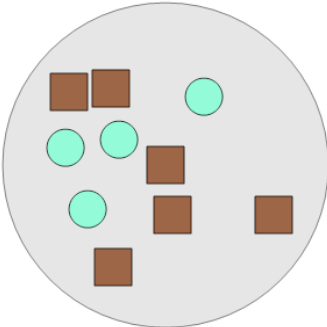


Math worksheet on 'Ratios - Calculate Total Ratio from Values (From Image) (Level 2)'. Part of a broader unit on 'Rates and Ratios - Intro'

Learn online: app.mobius.academy/math/units/rates_and_ratios_intro/

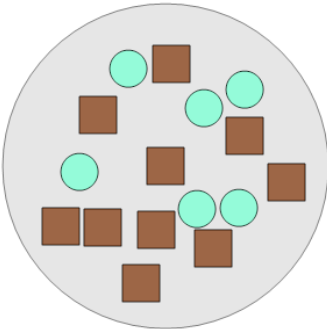
1 What is the (simplest) ratio of circles to all shapes?

a	b	c
2:5	1:14	10:2
d		
6:11		



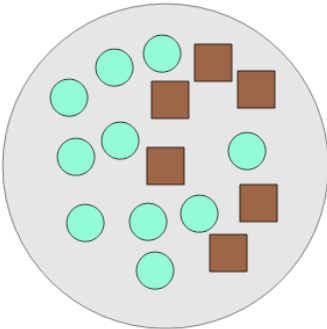
2 What is the (simplest) ratio of circles to all shapes?

a	b	c
7:9	6:11	3:8
d		
2:4		



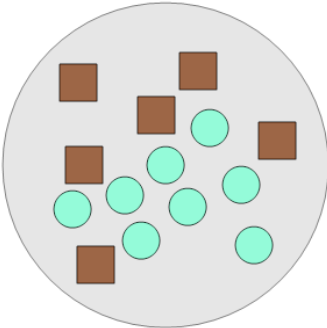
3 What is the (simplest) ratio of squares to all shapes?

a	b	c
4:16	3:8	6:1
d		
12:9		



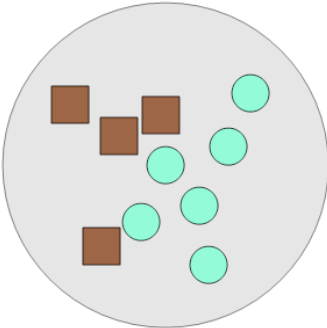
4 What is the (simplest) ratio of squares to all shapes?

a	b	c
2:2	8:8	3:7
d		
7:2		



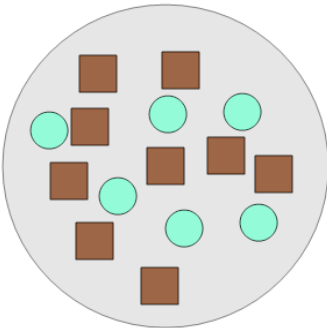
5 What is the (simplest) ratio of squares to all shapes?

a	b	c
11:3	1:3	6:4
d		
2:5		



6 What is the (simplest) ratio of circles to all shapes?

a	b	c
5:1	6:13	2:5
d		
1:11		



7 What is the (simplest) ratio of circles to all shapes?

a	b	c
2:7	11:5	4:3
d		
8:3		

