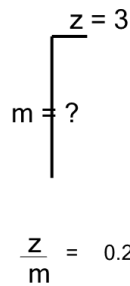




Math worksheet on 'Ratios of Lengths - Length and Ratio to Bottom Length, Whole Numbers - Right Angle Line Display (Level 1)'. Part of a broader unit on 'Trigonometry Foundations'

Learn online: app.mobius.academy/math/units/trigonometry_foundations/

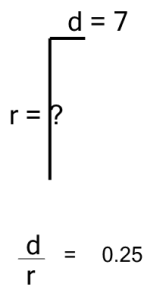
1



Solve for the length of line m

a	4	b	12
c	7	d	3
e	2	f	1

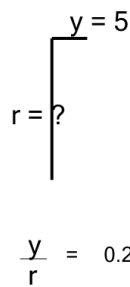
2



Solve for the length of line r

a	27	b	4
c	29	d	31
e	24	f	28

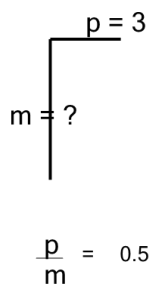
3



Solve for the length of line r

a	20	b	0
c	2	d	15
e	7	f	17

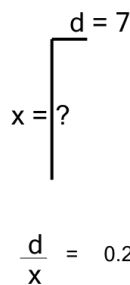
4



Solve for the length of line m

a	2	b	0
c	7	d	5
e	6	f	1

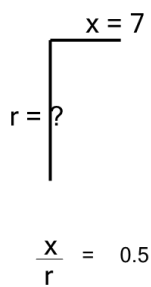
5



Solve for the length of line x

a	4	b	23
c	8	d	28
e	26	f	31

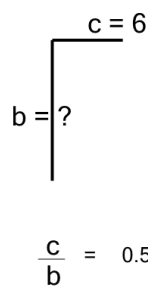
6



Solve for the length of line r

a	6	b	17
c	15	d	14
e	10	f	18

7



Solve for the length of line b

a	14	b	12
c	9	d	11
e	3	f	7