



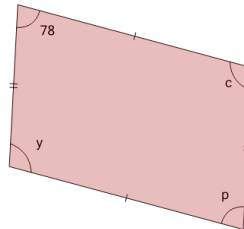
Math worksheet on 'Identical Angle on the Parallelogram (Level 1)'. Part of a broader unit on 'Geometry - Angles and Transformations - Intro'

Learn online:

app.mobius.academy/math/units/geometry_angles_and_transformations/

1

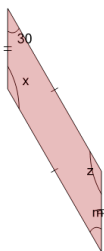
Select the angle of the parallelogram that is also 78°



a	p	b	y
c	None	d	c

2

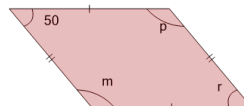
Select the angle of the parallelogram that is also 30°



a	None	b	m
c	z	d	x

3

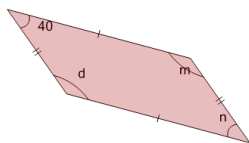
Select the angle of the parallelogram that is also 50°



a	None	b	r
c	m	d	p

4

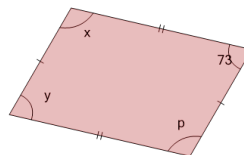
Select the angle of the parallelogram that is also 40°



a	None	b	m
c	n	d	d

5

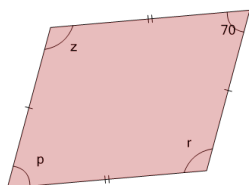
Select the angle of the parallelogram that is also 73°



a	x	b	y
c	None	d	p

6

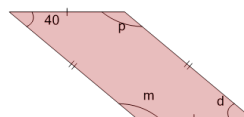
Select the angle of the parallelogram that is also 70°



a	r	b	p
c	None	d	z

7

Select the angle of the parallelogram that is also 40°



a	d	b	None
c	p	d	m