

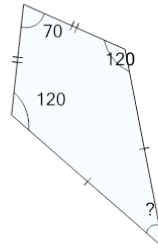


Math worksheet on 'Missing Angle on the Kite (Level 1)'. Part of a broader unit on 'Geometry - Angles and Transformations - Intro'

Learn online:

app.mobius.academy/math/units/geometry_angles_and_transformations/

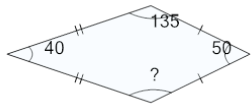
1



Find the missing angle of the kite

a	20	b	40
c	60	d	80
e	50	f	70

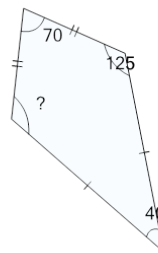
2



Find the missing angle of the kite

a	135	b	120
c	100	d	160
e	140	f	130

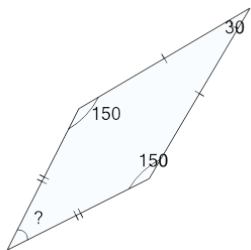
3



Find the missing angle of the kite

a	90	b	150
c	100	d	120
e	140	f	125

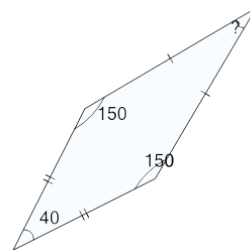
4



Find the missing angle of the kite

a	30	b	40
c	0	d	10
e	50	f	20

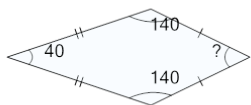
5



Find the missing angle of the kite

a	40	b	0
c	30	d	20
e	10	f	50

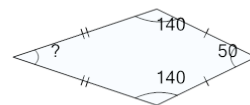
6



Find the missing angle of the kite

a	60	b	50
c	30	d	40
e	20	f	10

7



Find the missing angle of the kite

a	0	b	30
c	10	d	60
e	50	f	20