

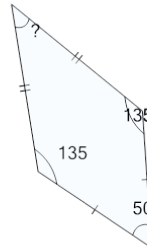


Math worksheet on 'Missing Angle on the Kite (Level 2)'. Part of a broader unit on 'Geometry - Angles and Transformations - Intro'

Learn online:

app.mobius.academy/math/units/geometry_angles_and_transformations/

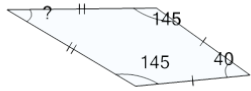
1



Find the missing angle of the kite

a	50	b	20
c	40	d	35
e	55	f	10

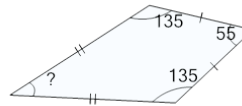
2



Find the missing angle of the kite

a	40	b	15
c	25	d	30
e	0	f	10

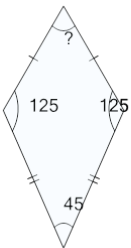
3



Find the missing angle of the kite

a	20	b	50
c	45	d	15
e	35	f	30

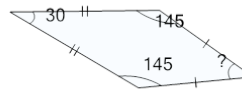
4



Find the missing angle of the kite

a	35	b	65
c	60	d	45
e	90	f	75

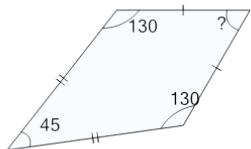
5



Find the missing angle of the kite

a	50	b	10
c	65	d	25
e	40	f	55

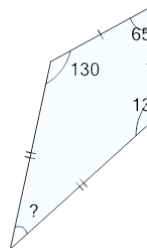
6



Find the missing angle of the kite

a	60	b	25
c	70	d	45
e	55	f	40

7



Find the missing angle of the kite

a	55	b	35
c	40	d	50
e	65	f	5