

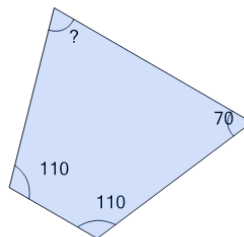


Math worksheet on 'Missing Angle on the Trapezoid (Level 1)'. Part of a broader unit on 'Geometry - Angles and Transformations - Intro'

Learn online:

[app.mobius.academy/math/units/geometry\\_angles\\_and\\_transformations/](http://app.mobius.academy/math/units/geometry_angles_and_transformations/)

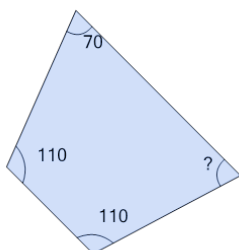
1



Find the missing angle of the trapezoid given that the interior angles must add up to  $360^\circ$

<b>a</b>	82	<b>b</b>	66
<b>c</b>	54	<b>d</b>	58
<b>e</b>	70	<b>f</b>	62

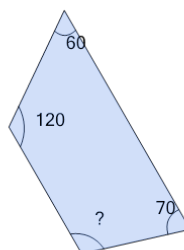
2



Find the missing angle of the trapezoid given that the interior angles must add up to  $360^\circ$

<b>a</b>	58	<b>b</b>	70
<b>c</b>	82	<b>d</b>	78
<b>e</b>	74	<b>f</b>	62

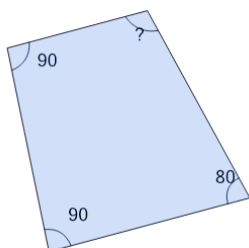
3



Find the missing angle of the trapezoid given that the interior angles must add up to  $360^\circ$

<b>a</b>	122	<b>b</b>	94
<b>c</b>	110	<b>d</b>	126
<b>e</b>	114	<b>f</b>	106

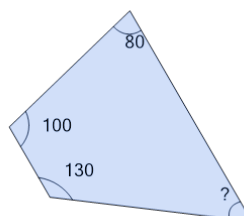
4



Find the missing angle of the trapezoid given that the interior angles must add up to  $360^\circ$

<b>a</b>	112	<b>b</b>	84
<b>c</b>	100	<b>d</b>	96
<b>e</b>	92	<b>f</b>	116

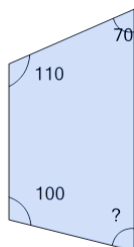
5



Find the missing angle of the trapezoid given that the interior angles must add up to  $360^\circ$

<b>a</b>	54	<b>b</b>	62
<b>c</b>	50	<b>d</b>	66
<b>e</b>	30	<b>f</b>	38

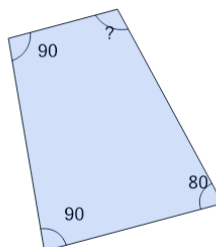
6



Find the missing angle of the trapezoid given that the interior angles must add up to  $360^\circ$

<b>a</b>	60	<b>b</b>	72
<b>c</b>	68	<b>d</b>	96
<b>e</b>	80	<b>f</b>	84

7



Find the missing angle of the trapezoid given that the interior angles must add up to  $360^\circ$

<b>a</b>	104	<b>b</b>	100
<b>c</b>	108	<b>d</b>	80
<b>e</b>	96	<b>f</b>	116