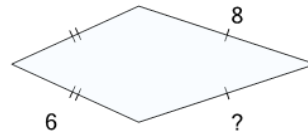




Math worksheet on 'Missing Side on the Kite (Level 1)'. Part of a broader unit on 'Perimeter Advanced'

Learn online: app.mobius.academy/math/units/perimeter_advanced/

1



Find the missing side of the kite

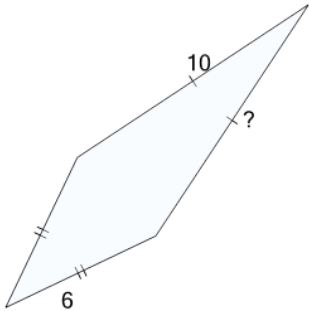
a

8

b

6

2



Find the missing side of the kite

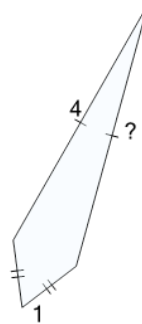
a

10

b

6

3



Find the missing side of the kite

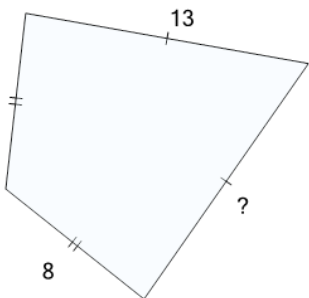
a

1

b

4

4



Find the missing side of the kite

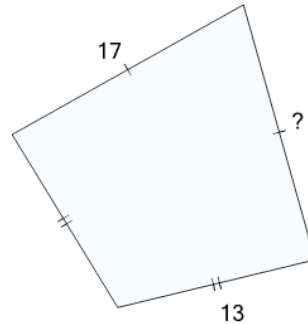
a

8

b

13

5



Find the missing side of the kite

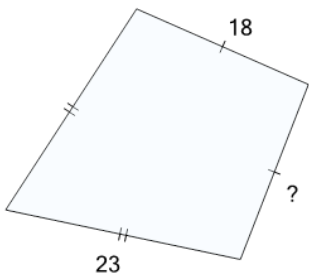
a

17

b

13

6



Find the missing side of the kite

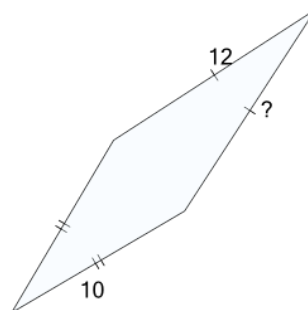
a

18

b

23

7



Find the missing side of the kite

a

10

b

12