




Math worksheet on 'Shapes - 2D Complex (Level 2)'.
Part of a broader unit on 'Geometry - Shape Classification (2D) - Intro'

Learn online:

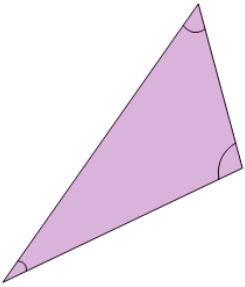
app.mobius.academy/math/units/geometry_shapes_2d_classifying_intro/

1 Name the type of shape



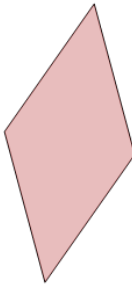
a	Oval
b	Right Triangle
c	Trapezoid
d	Circle
e	Square
f	Non-Right Triangle

2 Name the type of shape




a	Rectangle
b	Oval
c	Rhombus
d	Kite
e	Non-Right Triangle
f	Parallelogram

3 Name the type of shape



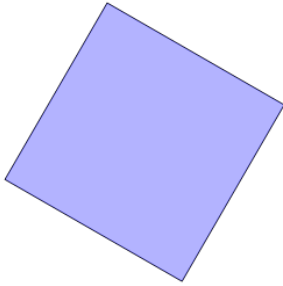
a	Rectangle	b	Oval
c	Circle	d	Kite
e	Square	f	Rhombus

4 Name the type of shape



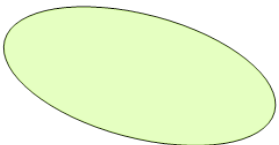
a	Rhombus
b	Right Triangle
c	Circle
d	Square
e	Non-Right Triangle
f	Kite

5 Name the type of shape



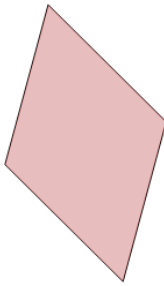
a	Trapezoid
b	Kite
c	Oval
d	Circle
e	Square
f	Non-Right Triangle

6 Name the type of shape



a	Non-Right Triangle
b	Parallelogram
c	Square
d	Circle
e	Rhombus
f	Oval

7 Name the type of shape



a	Rhombus
b	Oval
c	Rectangle
d	Kite
e	Right Triangle
f	Non-Right Triangle