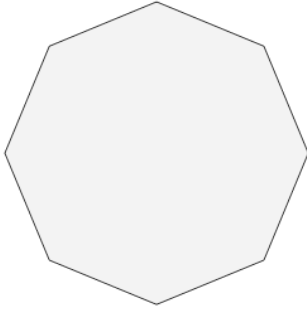




Math worksheet on 'Count Sides on 2D Shapes - First Time (Level 1)'. Part of a broader unit on 'Geometry Basics - Intro'

Learn online: [app.mobius.academy/math/units/geometry\\_basics/](http://app.mobius.academy/math/units/geometry_basics/)


**1**



How many sides does this shape have?

<b>a</b>	<b>b</b>
6 Sides	8 Sides

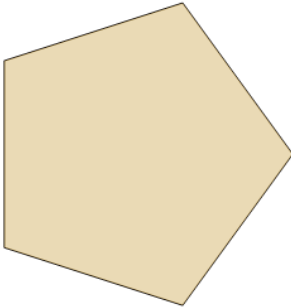
**2**



How many sides does this shape have?

<b>a</b>	<b>b</b>
4 Sides	3 Sides

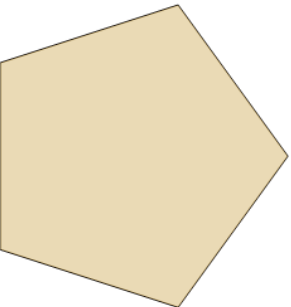
**3**



How many sides does this shape have?

<b>a</b>	<b>b</b>
6 Sides	5 Sides

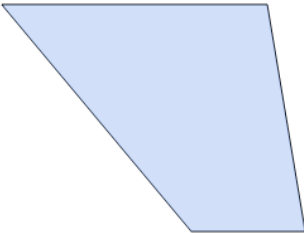
**4**



How many sides does this shape have?

<b>a</b>	<b>b</b>
6 Sides	5 Sides


**5**



How many sides does this shape have?

<b>a</b>	<b>b</b>
4 Sides	3 Sides


**6**



How many sides does this shape have?

<b>a</b>	<b>b</b>
4 Sides	2 Sides

**7**



How many sides does this shape have?

<b>a</b>	<b>b</b>
3 Sides	4 Sides