




Math worksheet on 'Count Sides on 2D Shapes (Level 1)'. Part of a broader unit on 'Geometry Basics - Intro'

Learn online: app.mobius.academy/math/units/geometry_basics/

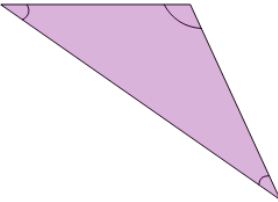
1 Count the number of sides that the shape has.

a	b	c
5	2	3
d		
4		




2 Count the number of sides that the shape has.

a	b	c
1	2	3
d		
4		




3 Count the number of sides that the shape has.

a	b	c
4	5	3
d		
2		




4 Count the number of sides that the shape has.

a	b	c
2	5	4
d		
3		



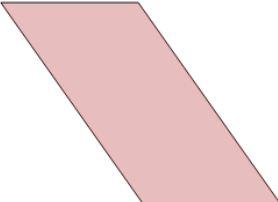
5 Count the number of sides that the shape has.

a	b	c
5	2	3
d		
4		



6 Count the number of sides that the shape has.

a	b	c
2	3	5
d		
4		



7 Count the number of sides that the shape has.

a	b	c
6	7	4
d		
5		

