

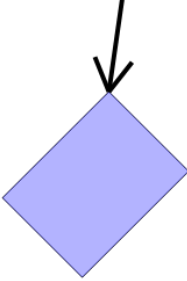


Math worksheet on '2D Shapes - Side and Vertex Naming - Image to Name (Level 2)'. Part of a broader unit on 'Geometry - Shape Classification (2D) - Intro'

Learn online:

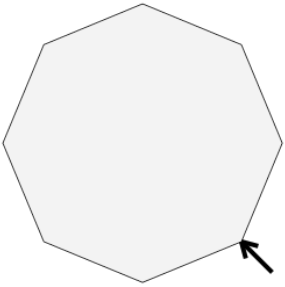
[app.mobius.academy/math/units/geometry\\_shapes\\_2d\\_classifying\\_intro/](http://app.mobius.academy/math/units/geometry_shapes_2d_classifying_intro/)

**1** What is the arrow pointing to on this shape?



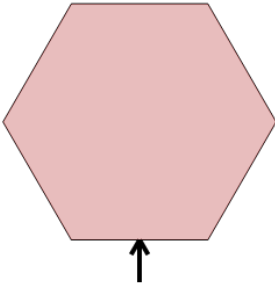
<b>a</b> face	<b>b</b> side
<b>c</b> vertex	

**2** What is the arrow pointing to on this shape?



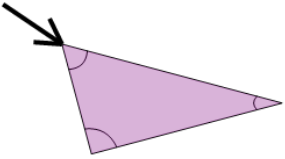
<b>a</b> vertex	<b>b</b> side
<b>c</b> face	

**3** What is the arrow pointing to on this shape?



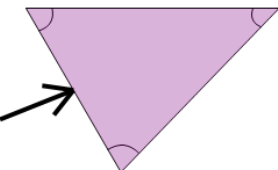
<b>a</b> side	<b>b</b> vertex
<b>c</b> face	

**4** What is the arrow pointing to on this shape?



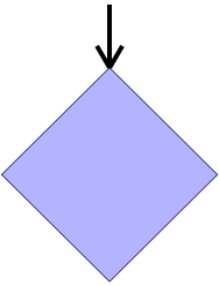
<b>a</b> face	<b>b</b> vertex
<b>c</b> side	

**5** What is the arrow pointing to on this shape?



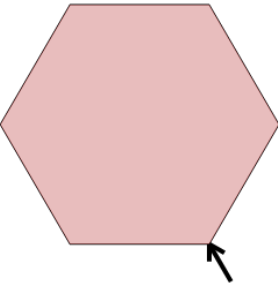
<b>a</b> vertex	<b>b</b> face
<b>c</b> side	

**6** What is the arrow pointing to on this shape?



<b>a</b> vertex	<b>b</b> face
<b>c</b> side	

**7** What is the arrow pointing to on this shape?



<b>a</b> vertex	<b>b</b> side
<b>c</b> face	