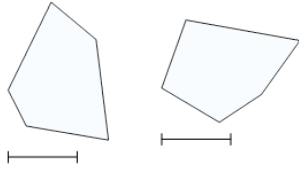
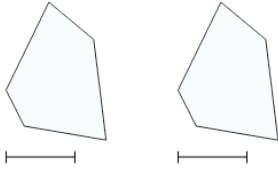


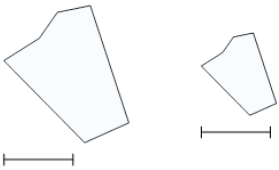
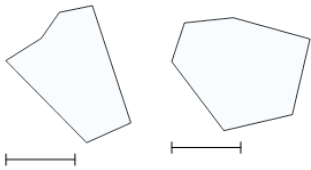


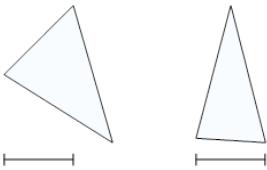
Math worksheet on '2D Shape Congruent or Similar - Description to Image Pair (Level 1)'. Part of a broader unit on 'Geometry - Shape Classification (2D) - Intro'

Learn online:

app.mobius.academy/math/units/geometry_shapes_2d_classifying_intro/

1 Which pair of images matches this description?	All angles and side lengths are identical
a 	b 

2 Which pair of images matches this description?	One or more angles are different
a 	b 

3 Which pair of images matches this description?	All angles are identical
a 	b 