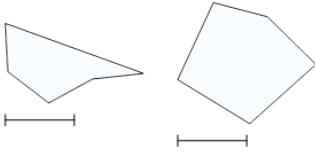
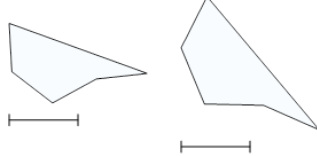
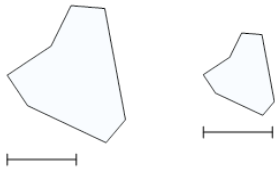
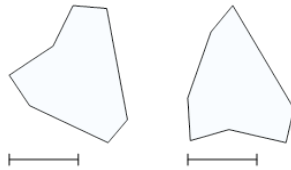


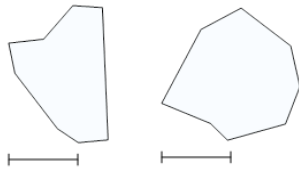


Math worksheet on '2D Shape Congruent or Similar - Description to Image Pair (Level 2)'. Part of a broader unit on 'Geometry Basics - Practice'

Learn online: app.mobius.academy/math/units/geometry_basics_practice/

<p>1 Which pair of images matches this description?</p>	<p>All angles and side lengths are identical</p>
<p>a</p> 	<p>b</p> 

<p>2 Which pair of images matches this description?</p>	<p>One or more angles are different</p>
<p>a</p> 	<p>b</p> 

<p>3 Which pair of images matches this description?</p>	<p>All angles are identical</p>
<p>a</p> 	<p>b</p> 