

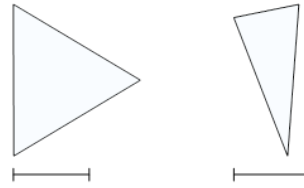


Math worksheet on '2D Shape Congruent or Similar - Image Pair and Property to Yes/No (Level 1)'. Part of a broader unit on 'Geometry - Shape Classification (2D) - Intro'

Learn online:

[app.mobius.academy/math/units/geometry\\_shapes\\_2d\\_classifying\\_intro/](http://app.mobius.academy/math/units/geometry_shapes_2d_classifying_intro/)

1



Are these shapes similar?

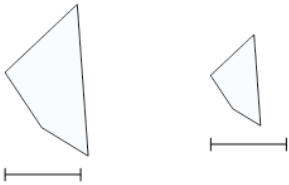
a

Yes

b

No

2



Are these shapes neither similar nor congruent?

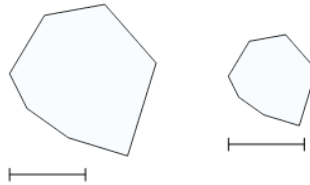
a

Yes

b

No

3



Are these shapes similar?

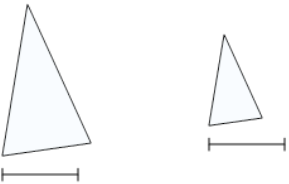
a

Yes

b

No

4



Are these shapes similar?

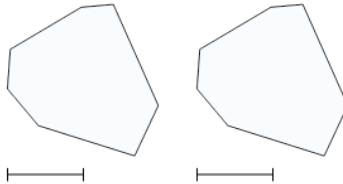
a

Yes

b

No

5



Are these shapes congruent?

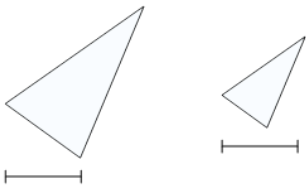
a

Yes

b

No

6



Are these shapes similar?

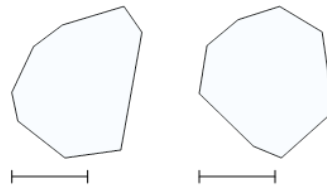
a

Yes

b

No

7



Are these shapes similar?

a

Yes

b

No