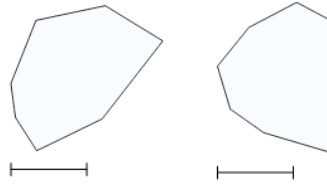




Math worksheet on '2D Shape Congruent or Similar - Image Pair and Property to Yes/No (Level 2)'. Part of a broader unit on 'Geometry Basics - Advanced'

Learn online: app.mobius.academy/math/units/geometry_basics_advanced/

1



Are these shapes neither similar nor congruent?

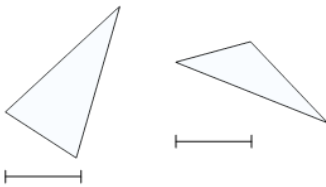
a

Yes

b

No

2



Are these shapes similar?

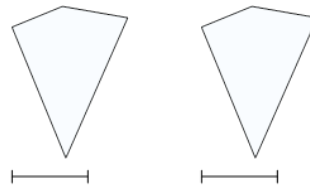
a

Yes

b

No

3



Are these shapes congruent?

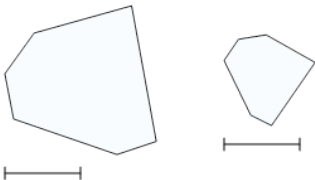
a

Yes

b

No

4



Are these shapes similar?

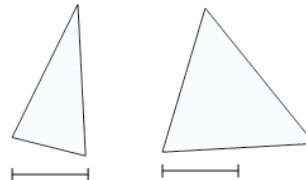
a

Yes

b

No

5



Are these shapes neither similar nor congruent?

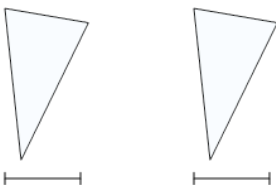
a

Yes

b

No

6



Are these shapes neither similar nor congruent?

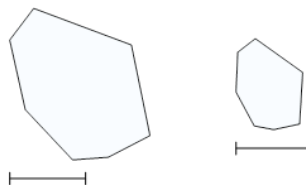
a

Yes

b

No

7



Are these shapes congruent?

a

Yes

b

No