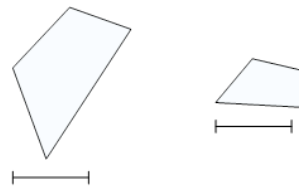




Math worksheet on '2D Shape Congruent or Similar - Image Pair to Description (Level 2)'. Part of a broader unit on 'Geometry Basics - Advanced'

Learn online: app.mobius.academy/math/units/geometry_basics_advanced/

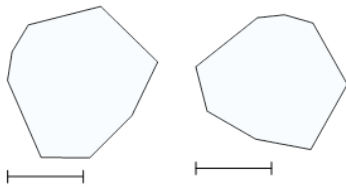
1



What is the most accurate description of these shapes?

- a** All angles are identical
- b** All angles and side lengths are identical

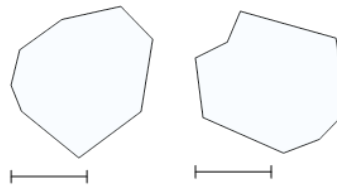
2



What is the most accurate description of these shapes?

- a** All angles and side lengths are identical
- b** One or more angles are different

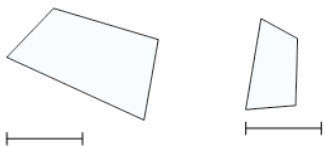
3



What is the most accurate description of these shapes?

- a** One or more angles are different
- b** All angles and side lengths are identical

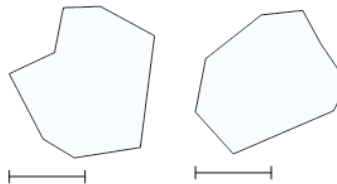
4



What is the most accurate description of these shapes?

- a** All angles are identical
- b** One or more angles are different

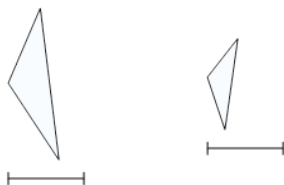
5



What is the most accurate description of these shapes?

- a** One or more angles are different
- b** All angles and side lengths are identical

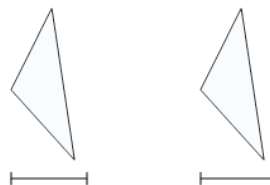
6



What is the most accurate description of these shapes?

- a** All angles are identical
- b** One or more angles are different

7



What is the most accurate description of these shapes?

- a** All angles and side lengths are identical
- b** One or more angles are different