

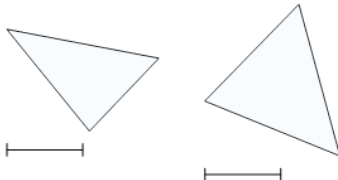


Math worksheet on '2D Shape Congruent or Similar - Image Pair to Property (Level 1)'. Part of a broader unit on 'Geometry Basics - Practice'

Learn online: app.mobius.academy/math/units/geometry_basics_practice/

1

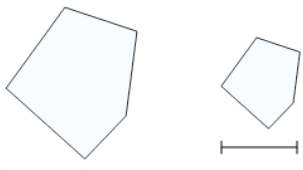
What is the best property to describe these shapes?



| | |
|----------|-------------------------------|
| a | neither similar nor congruent |
| b | similar |

2

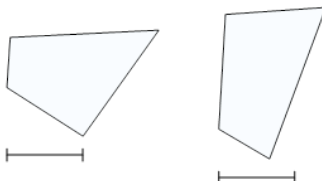
What is the best property to describe these shapes?



| | | | |
|----------|---------|----------|-----------|
| a | similar | b | congruent |
|----------|---------|----------|-----------|

3

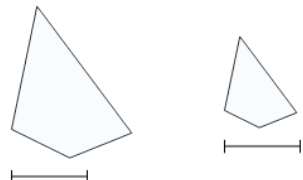
What is the best property to describe these shapes?



| | |
|----------|-------------------------------|
| a | neither similar nor congruent |
| b | congruent |

4

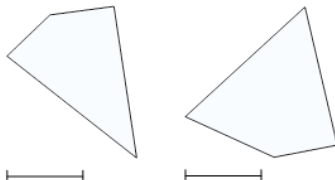
What is the best property to describe these shapes?



| | | | |
|----------|-----------|----------|---------|
| a | congruent | b | similar |
|----------|-----------|----------|---------|

5

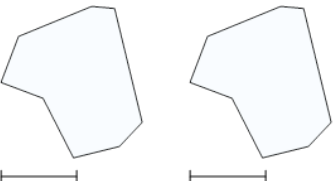
What is the best property to describe these shapes?



| | |
|----------|-------------------------------|
| a | similar |
| b | neither similar nor congruent |

6

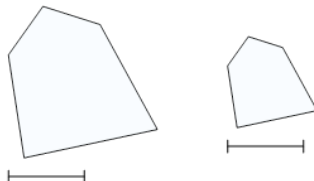
What is the best property to describe these shapes?



| | |
|----------|-------------------------------|
| a | neither similar nor congruent |
| b | congruent |

7

What is the best property to describe these shapes?



| | |
|----------|-------------------------------|
| a | similar |
| b | neither similar nor congruent |