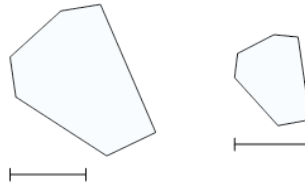




Math worksheet on '2D Shape Congruent or Similar - Image Pair to Property (Level 2)'. Part of a broader unit on 'Geometry Basics - Advanced'

Learn online: [app.mobius.academy/math/units/geometry\\_basics\\_advanced/](http://app.mobius.academy/math/units/geometry_basics_advanced/)

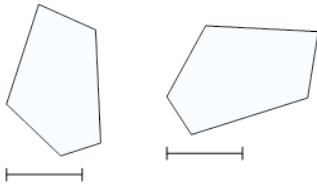
1



What is the best property to describe these shapes?

- |          |                               |
|----------|-------------------------------|
| <b>a</b> | neither similar nor congruent |
| <b>b</b> | similar                       |

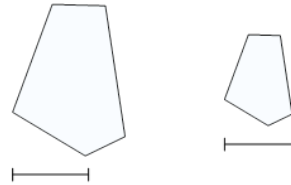
2



What is the best property to describe these shapes?

- |          |                               |
|----------|-------------------------------|
| <b>a</b> | congruent                     |
| <b>b</b> | neither similar nor congruent |

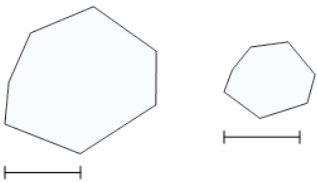
3



What is the best property to describe these shapes?

- |          |           |          |         |
|----------|-----------|----------|---------|
| <b>a</b> | congruent | <b>b</b> | similar |
|----------|-----------|----------|---------|

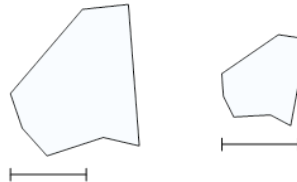
4



What is the best property to describe these shapes?

- |          |                               |
|----------|-------------------------------|
| <b>a</b> | similar                       |
| <b>b</b> | neither similar nor congruent |

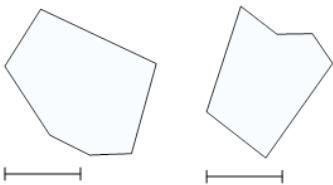
5



What is the best property to describe these shapes?

- |          |           |          |         |
|----------|-----------|----------|---------|
| <b>a</b> | congruent | <b>b</b> | similar |
|----------|-----------|----------|---------|

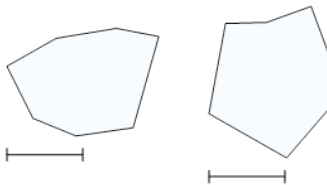
6



What is the best property to describe these shapes?

- |          |                               |
|----------|-------------------------------|
| <b>a</b> | neither similar nor congruent |
| <b>b</b> | congruent                     |

7



What is the best property to describe these shapes?

- |          |                               |
|----------|-------------------------------|
| <b>a</b> | similar                       |
| <b>b</b> | neither similar nor congruent |