



Math worksheet on '2D Shape Congruent or Similar - Property to Image Pair (Level 2)'. Part of a broader unit on 'Geometry Basics - Advanced'

Learn online: app.mobius.academy/math/units/geometry_basics_advanced/

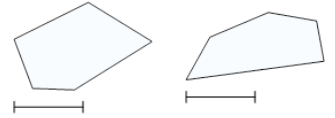
1 Which pair of images is neither similar nor congruent?

neither similar nor congruent

a



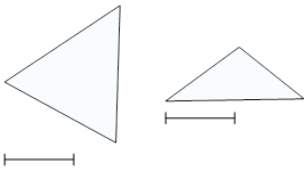
b



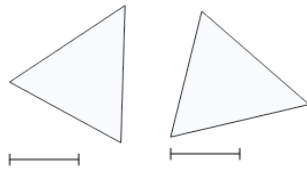
2 Which pair of images is congruent?

congruent

a



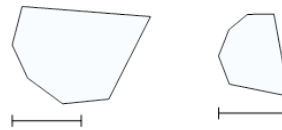
b



3 Which pair of images is similar?

similar

a



b

