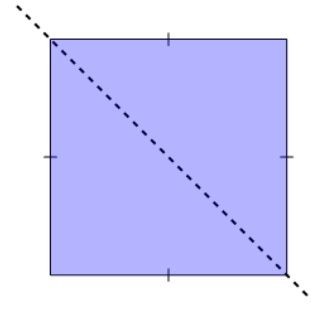




Math worksheet on '2D Shape Symmetry - Is This a Line of Symmetry (Level 1)'. Part of a broader unit on 'Geometry Basics - Intro'

Learn online: [app.mobius.academy/math/units/geometry\\_basics/](http://app.mobius.academy/math/units/geometry_basics/)

1



Is this a line of symmetry on this Square?

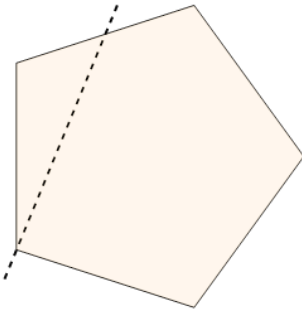
**a**

Yes

**b**

No

2



Is this a line of symmetry on this Pentagon?

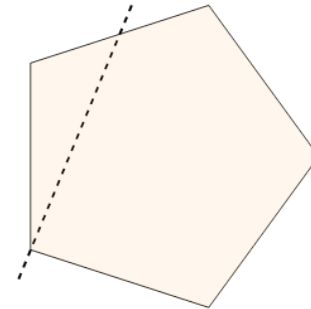
**a**

Yes

**b**

No

3



Is this a line of symmetry on this Pentagon?

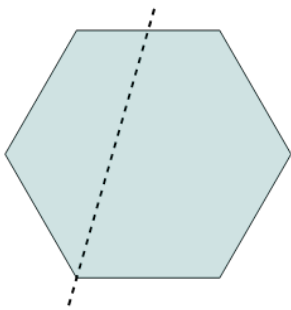
**a**

Yes

**b**

No

4



Is this a line of symmetry on this Hexagon?

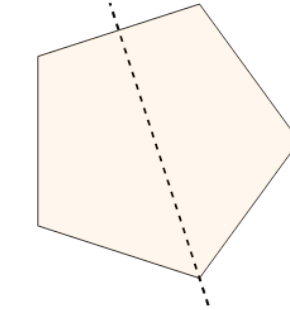
**a**

Yes

**b**

No

5



Is this a line of symmetry on this Pentagon?

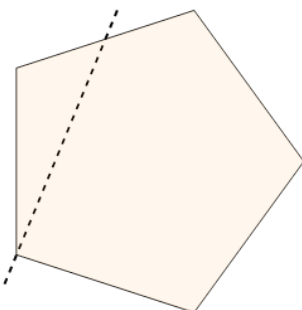
**a**

Yes

**b**

No

6



Is this a line of symmetry on this Pentagon?

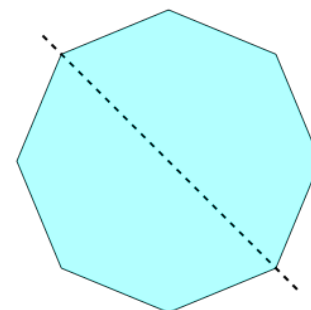
**a**

Yes

**b**

No

7



Is this a line of symmetry on this Octagon?

**a**

Yes

**b**

No