

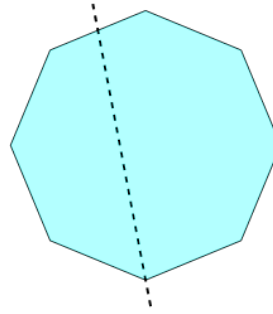


Math worksheet on '2D Shape Symmetry - Is This a Line of Symmetry (Level 2)'. Part of a broader unit on 'Geometry - Shape Classification (2D) - Intro'

Learn online:

app.mobius.academy/math/units/geometry_shapes_2d_classifying_intro/

1



Is this a line of symmetry on this Octagon?

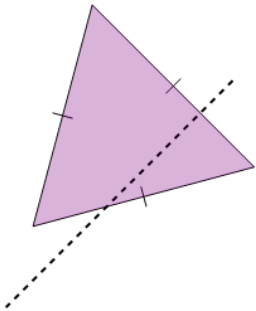
a

Yes

b

No

2



Is this a line of symmetry on this Triangle?

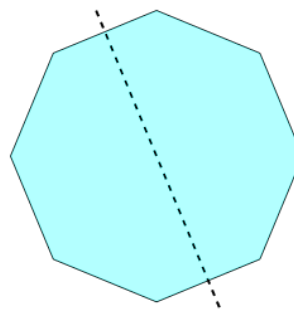
a

Yes

b

No

3



Is this a line of symmetry on this Octagon?

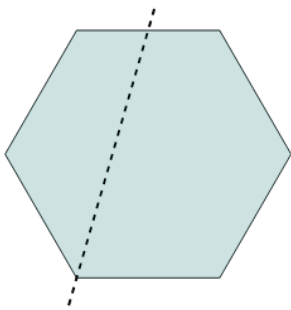
a

Yes

b

No

4



Is this a line of symmetry on this Hexagon?

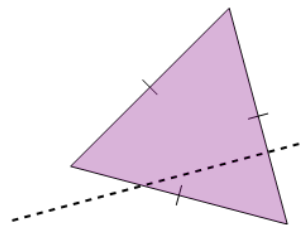
a

Yes

b

No

5



Is this a line of symmetry on this Triangle?

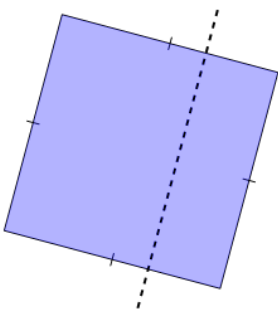
a

Yes

b

No

6



Is this a line of symmetry on this Square?

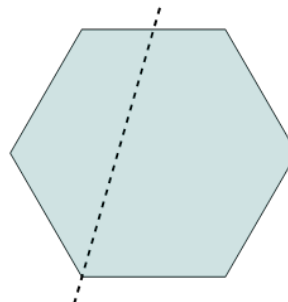
a

Yes

b

No

7



Is this a line of symmetry on this Hexagon?

a

Yes

b

No