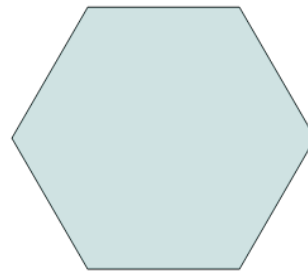




Math worksheet on '2D Shape Symmetry - Where Is Line of Symmetry (Level 1)'. Part of a broader unit on 'Geometry Basics - Intro'

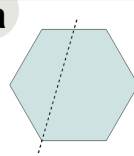
Learn online: [app.mobius.academy/math/units/geometry\\_basics/](http://app.mobius.academy/math/units/geometry_basics/)

1

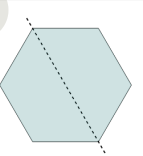


Where is a line of symmetry on this Hexagon?

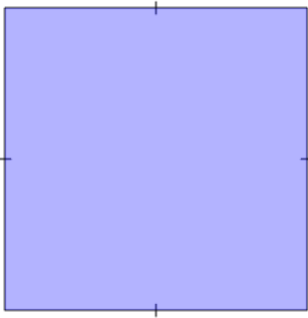
a



b

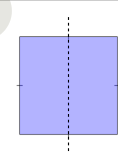


2

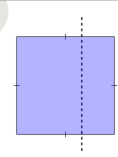


Where is a line of symmetry on this Square?

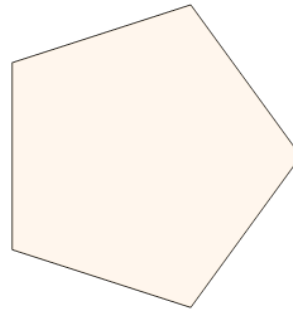
a



b

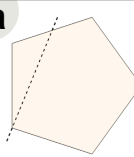


3

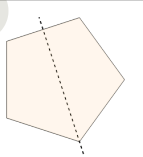


Where is a line of symmetry on this Pentagon?

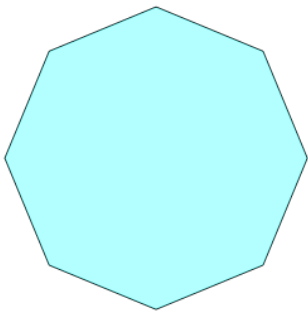
a



b

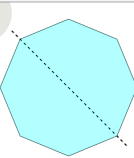


4

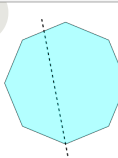


Where is a line of symmetry on this Octagon?

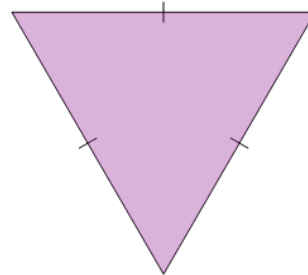
a



b

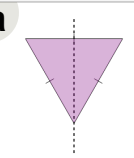


5

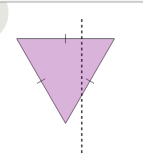


Where is a line of symmetry on this Triangle?

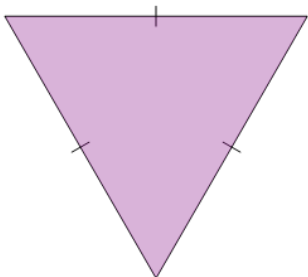
a



b

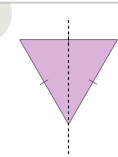


6

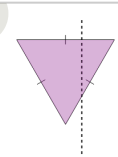


Where is a line of symmetry on this Triangle?

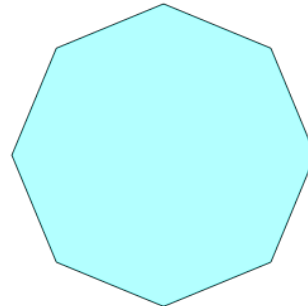
a



b

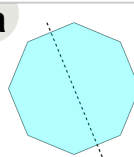


7



Where is a line of symmetry on this Octagon?

a



b

