

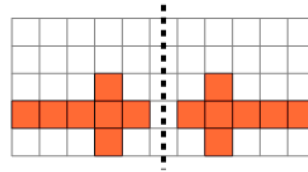


Math worksheet on '2D Shape Symmetry - Is This Symmetric (Level 2)'. Part of a broader unit on 'Geometry - Shape Classification (2D) - Intro'

Learn online:

[app.mobius.academy/math/units/geometry\\_shapes\\_2d\\_classifying\\_intro/](http://app.mobius.academy/math/units/geometry_shapes_2d_classifying_intro/)

1



Are the left and right sides symmetric?

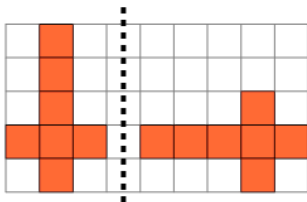
a

Yes

b

No

2



Are the left and right sides symmetric?

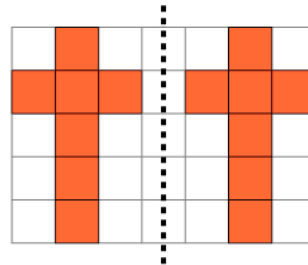
a

Yes

b

No

3



Are the left and right sides symmetric?

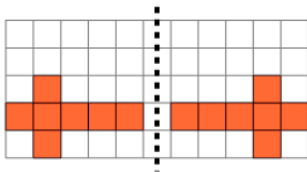
a

Yes

b

No

4



Are the left and right sides symmetric?

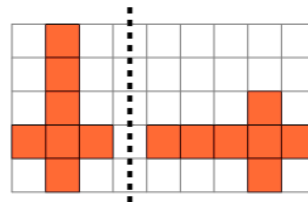
a

Yes

b

No

5



Are the left and right sides symmetric?

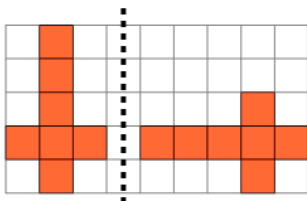
a

Yes

b

No

6



Are the left and right sides symmetric?

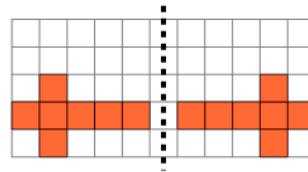
a

Yes

b

No

7



Are the left and right sides symmetric?

a

Yes

b

No