

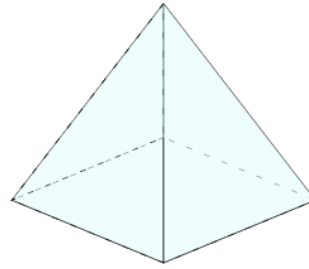


Math worksheet on '3D Shapes - Count Edges and Faces - First Time (Level 1)'. Part of a broader unit on 'Geometry - Surface Area of 3D Shapes - Intro'

Learn online:

app.mobius.academy/math/units/geometry_surface_area_basic_shapes_intro/

1

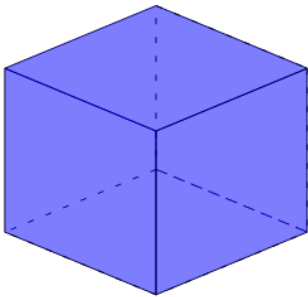


How many edges and faces does this shape have?

a 8 Edges and 5 Faces

b 8 Edges and 4 Faces

2

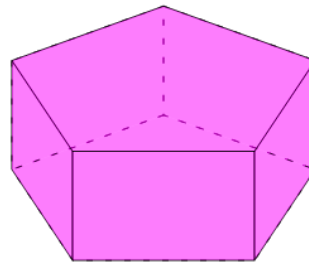


How many edges and faces does this shape have?

a 11 Edges and 6 Faces

b 12 Edges and 6 Faces

3

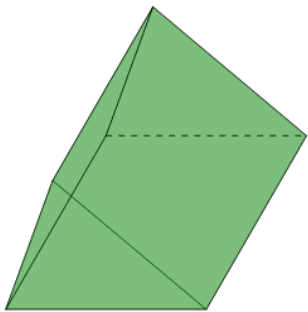


How many edges and faces does this shape have?

a 13 Edges and 8 Faces

b 15 Edges and 7 Faces

4

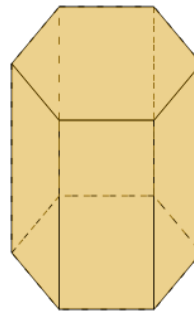


How many edges and faces does this shape have?

a 8 Edges and 6 Faces

b 9 Edges and 5 Faces

5

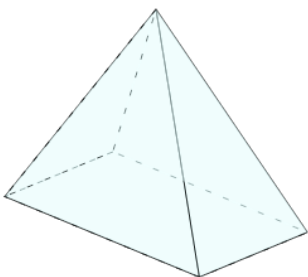


How many edges and faces does this shape have?

a 18 Edges and 8 Faces

b 16 Edges and 8 Faces

6

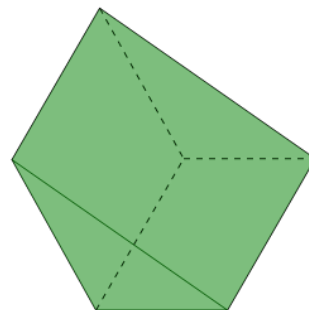


How many edges and faces does this shape have?

a 8 Edges and 5 Faces

b 9 Edges and 3 Faces

7



How many edges and faces does this shape have?

a 8 Edges and 5 Faces

b 9 Edges and 5 Faces