

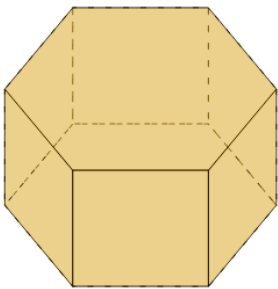


Math worksheet on '3D Shapes - Count Edges and Faces (Level 1)'. Part of a broader unit on 'Geometry - Surface Area of 3D Shapes - Intro'

Learn online:

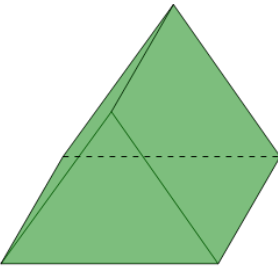
app.mobius.academy/math/units/geometry_surface_area_basic_shapes_intro/

2 Count how many edges and faces this shape has



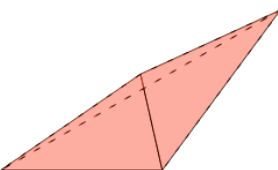
- a** 19 edges, 6 faces
- b** 16 edges, 7 faces
- c** 18 edges, 8 faces
- d** 19 edges, 9 faces
- e** 18 edges, 7 faces
- f** 16 edges, 6 faces

4 Count how many edges and faces this shape has



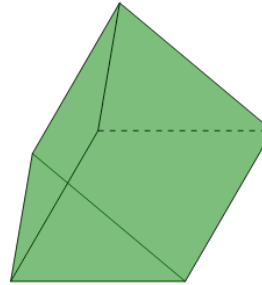
- a** 10 edges, 4 faces
- b** 8 edges, 6 faces
- c** 9 edges, 5 faces
- d** 8 edges, 4 faces
- e** 10 edges, 5 faces
- f** 10 edges, 6 faces

6 Count how many edges and faces this shape has



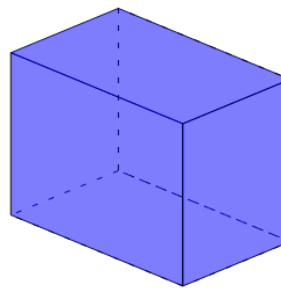
- a** 5 edges, 3 faces
- b** 7 edges, 3 faces
- c** 4 edges, 4 faces
- d** 5 edges, 4 faces
- e** 6 edges, 4 faces
- f** 7 edges, 4 faces

1 Count how many edges and faces this shape has



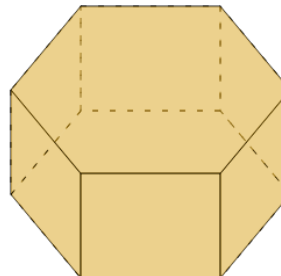
- a** 7 edges, 4 faces
- b** 7 edges, 5 faces
- c** 9 edges, 5 faces
- d** 9 edges, 6 faces
- e** 10 edges, 5 faces
- f** 10 edges, 6 faces

3 Count how many edges and faces this shape has



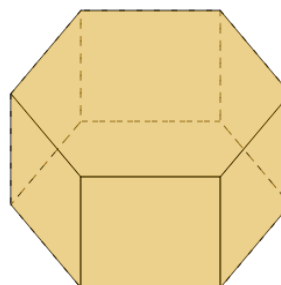
- a** 11 edges, 7 faces
- b** 10 edges, 5 faces
- c** 11 edges, 5 faces
- d** 12 edges, 6 faces
- e** 13 edges, 5 faces
- f** 10 edges, 4 faces

5 Count how many edges and faces this shape has



- a** 16 edges, 6 faces
- b** 18 edges, 6 faces
- c** 18 edges, 8 faces
- d** 17 edges, 6 faces
- e** 17 edges, 9 faces
- f** 17 edges, 7 faces

7 Count how many edges and faces this shape has



- a** 17 edges, 6 faces
- b** 18 edges, 8 faces
- c** 16 edges, 7 faces
- d** 17 edges, 8 faces
- e** 18 edges, 7 faces
- f** 16 edges, 8 faces