



Math worksheet on '3D Shapes - Count Edges - Reversed (Level 1)'. Part of a broader unit on 'Geometry - Volume of Simple 3D Shapes - Intro'

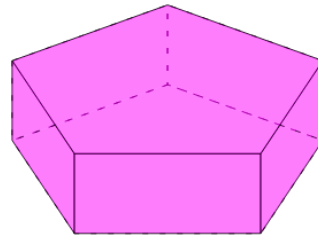
Learn online:

app.mobius.academy/math/units/geometry_volume_basic_shapes_intro/

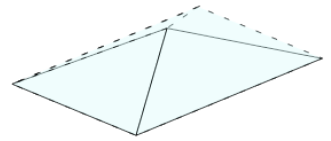
1 Select the shape that is described

15 edges

a



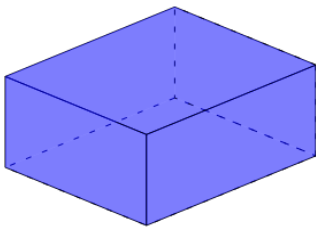
b



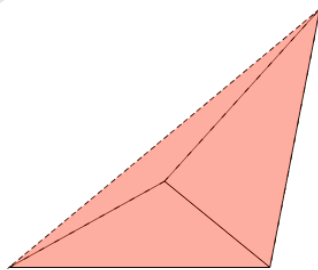
2 Select the shape that is described

6 edges

a



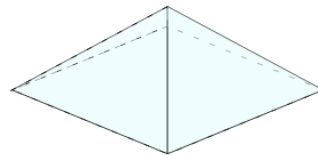
b



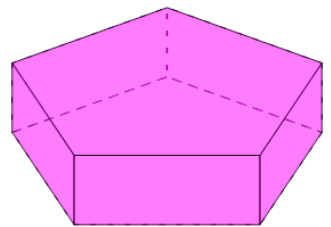
3 Select the shape that is described

8 edges

a



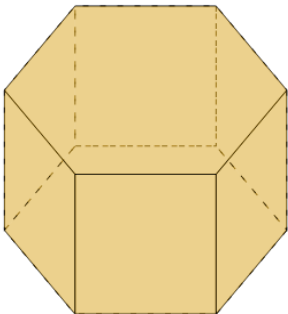
b



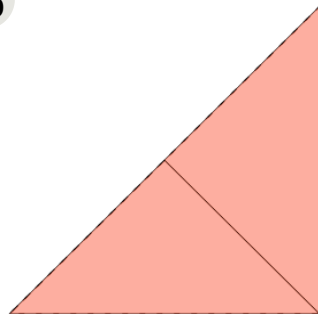
4 Select the shape that is described

18 edges

a



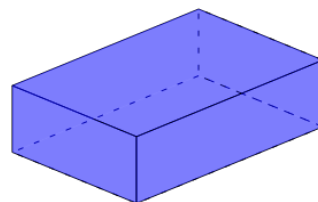
b



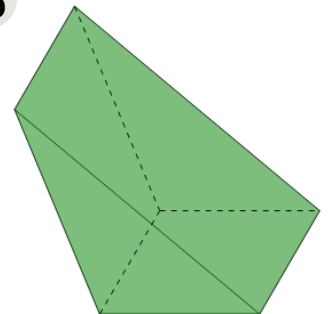
5 Select the shape that is described

12 edges

a



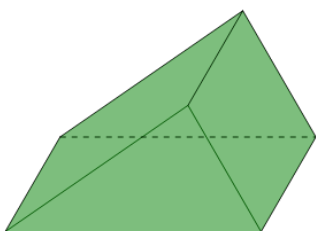
b



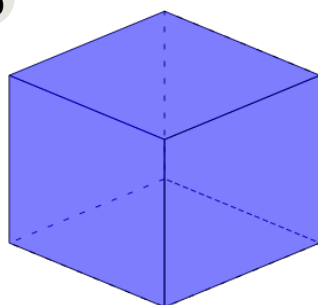
6 Select the shape that is described

9 edges

a



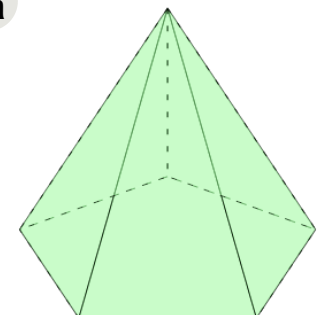
b



7 Select the shape that is described

10 edges

a



b

