



Math worksheet on '3D Shapes - Count Faces and Vertices - Reversed (Level 1)'. Part of a broader unit on 'Geometry - Volume of Simple 3D Shapes - Intro'

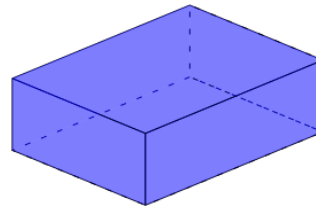
Learn online:

app.mobius.academy/math/units/geometry_volume_basic_shapes_intro/

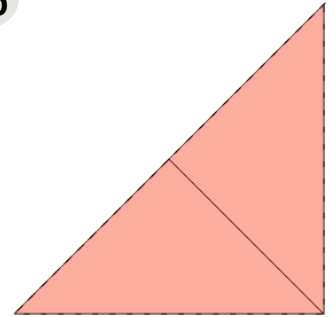
1 Select the shape that is described

6 faces, 8 vertices

a



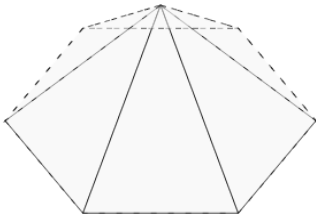
b



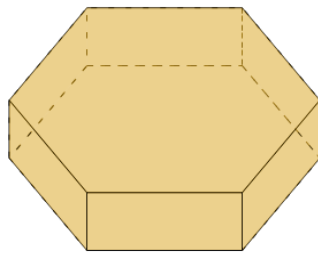
2 Select the shape that is described

8 faces, 12 vertices

a



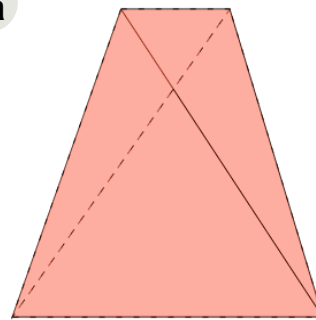
b



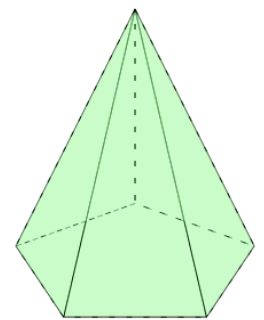
3 Select the shape that is described

6 faces, 6 vertices

a



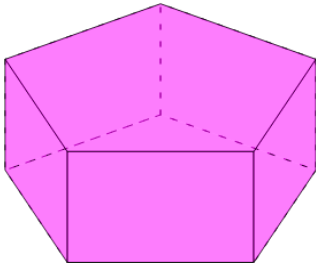
b



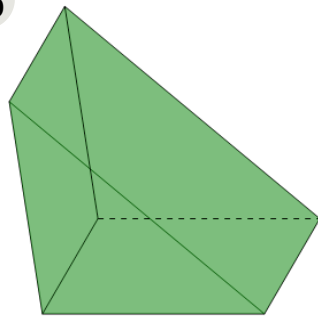
4 Select the shape that is described

7 faces, 10 vertices

a



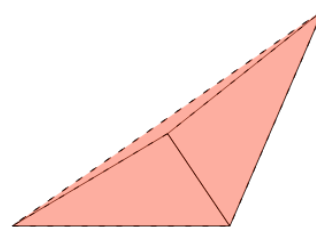
b



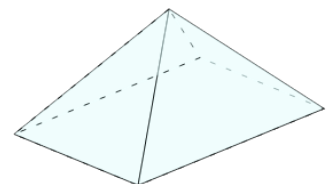
5 Select the shape that is described

4 faces, 4 vertices

a



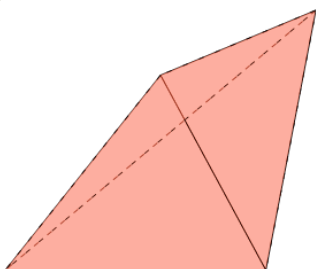
b



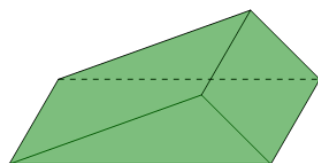
6 Select the shape that is described

5 faces, 6 vertices

a



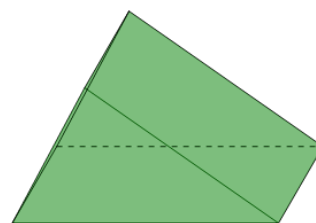
b



7 Select the shape that is described

7 faces, 7 vertices

a



b

