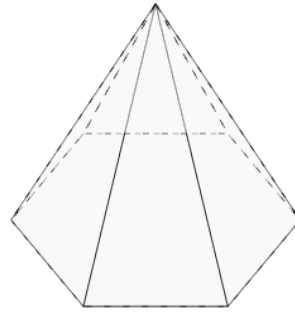




Math worksheet on '3D Shapes - Count Faces - First Time (Level 1)'. Part of a broader unit on 'Geometry Basics - Advanced'

Learn online: [app.mobius.academy/math/units/geometry\\_basics\\_advanced/](http://app.mobius.academy/math/units/geometry_basics_advanced/)

1



How many faces does this shape have?

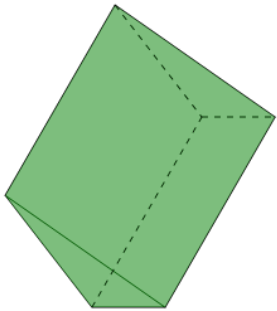
a

7 Faces

b

6 Faces

2



How many faces does this shape have?

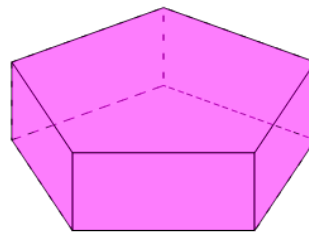
a

5 Faces

b

4 Faces

3



How many faces does this shape have?

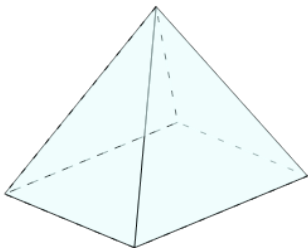
a

8 Faces

b

7 Faces

4



How many faces does this shape have?

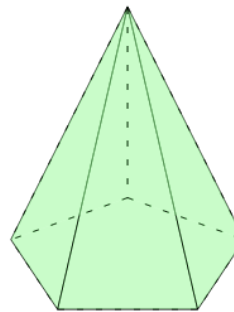
a

6 Faces

b

5 Faces

5



How many faces does this shape have?

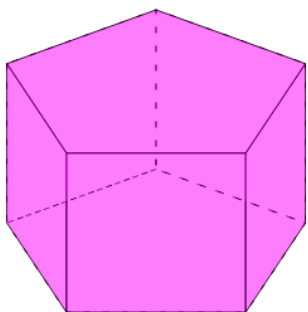
a

5 Faces

b

6 Faces

6



How many faces does this shape have?

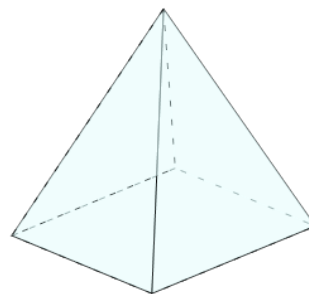
a

6 Faces

b

7 Faces

7



How many faces does this shape have?

a

5 Faces

b

4 Faces