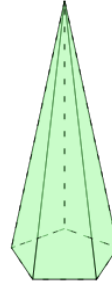




Math worksheet on '3D Shapes - Count Faces (Level 1)'. Part of a broader unit on 'Geometry Basics - Advanced'

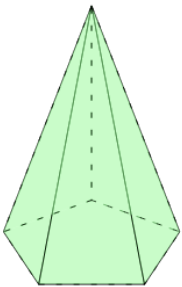
Learn online: app.mobius.academy/math/units/geometry_basics_advanced/

1 Count how many faces this shape has



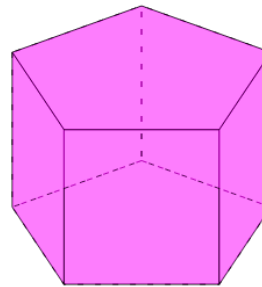
a	b	c
6	7	4
d		
5		

2 Count how many faces this shape has



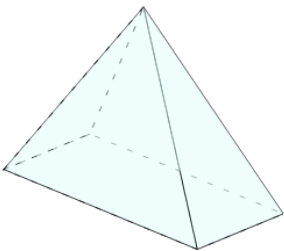
a	b	c
5	7	4
d		
6		

3 Count how many faces this shape has




a	b	c
5	8	7
d		
6		

4 Count how many faces this shape has



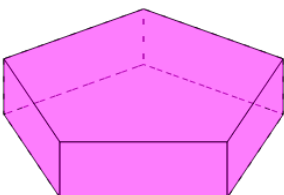
a	b	c
5	4	6
d		
3		

5 Count how many faces this shape has



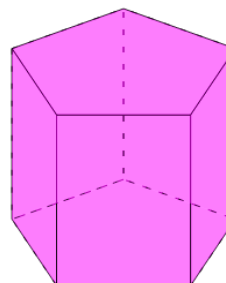
a	b	c
6	8	5
d		
7		

6 Count how many faces this shape has



a	b	c
7	8	6
d		
5		

7 Count how many faces this shape has



a	b	c
6	7	5
d		
8		