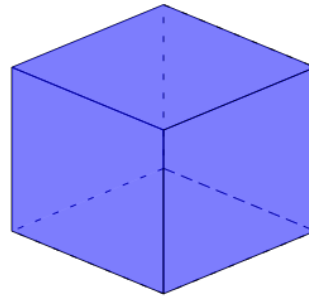




Math worksheet on '3D Shapes - Count Vertices - First Time (Level 1)'. Part of a broader unit on 'Geometry Basics - Advanced'

Learn online: [app.mobius.academy/math/units/geometry\\_basics\\_advanced/](http://app.mobius.academy/math/units/geometry_basics_advanced/)

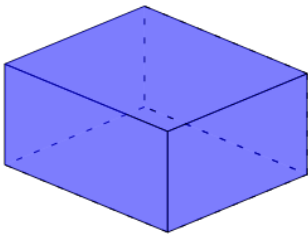
1



How many vertices (corners) does this shape have?

<b>a</b>	<b>b</b>
9 Vertices	8 Vertices

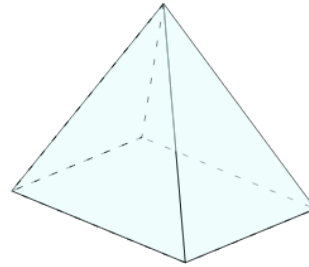
2



How many vertices (corners) does this shape have?

<b>a</b>	<b>b</b>
7 Vertices	8 Vertices

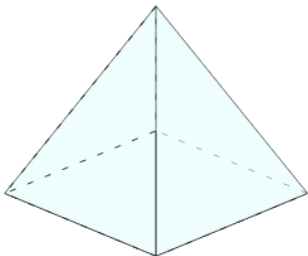
3



How many vertices (corners) does this shape have?

<b>a</b>	<b>b</b>
6 Vertices	5 Vertices

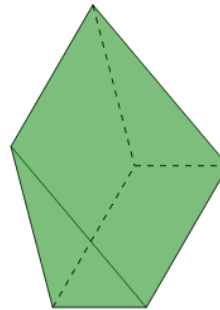
4



How many vertices (corners) does this shape have?

<b>a</b>	<b>b</b>
5 Vertices	4 Vertices

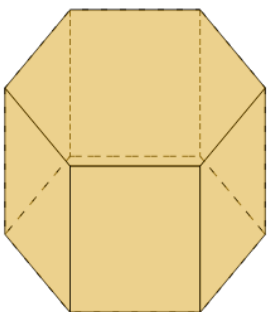
5



How many vertices (corners) does this shape have?

<b>a</b>	<b>b</b>
6 Vertices	5 Vertices

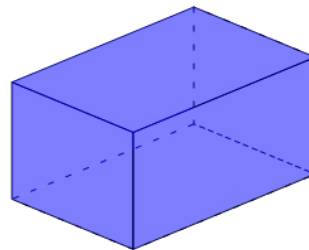
6



How many vertices (corners) does this shape have?

<b>a</b>	<b>b</b>
12 Vertices	10 Vertices

7



How many vertices (corners) does this shape have?

<b>a</b>	<b>b</b>
9 Vertices	8 Vertices