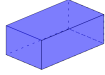

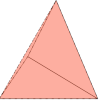
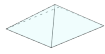

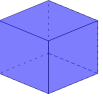


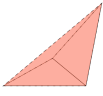

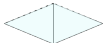
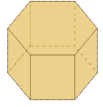




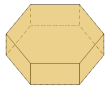

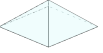
Math worksheet on '3D Shapes - Count Vertices - Reversed (Level 1)'. Part of a broader unit on 'Geometry - Shape Classification (3D) - Intro'

Learn online:

app.mobius.academy/math/units/geometry_shapes_3d_classifying_intro/

1	Select the shape that is described	a	b	c
				
	6 vertices	d	e	f
				

2	Select the shape that is described	a	b	c
				
	4 vertices	d	e	f
				

3	Select the shape that is described	a	b	c
				
	8 vertices	d	e	f
		