

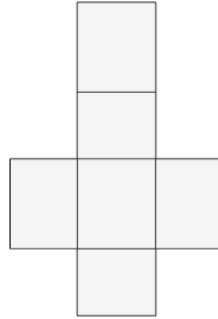


Math worksheet on 'Nets of 3D Shapes - Net to Shape Image (Level 1)'. Part of a broader unit on 'Geometry - Shape Classification (3D) - Intro'

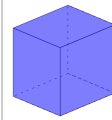
Learn online:

[app.mobius.academy/math/units/geometry\\_shapes\\_3d\\_classifying\\_intro/](http://app.mobius.academy/math/units/geometry_shapes_3d_classifying_intro/)

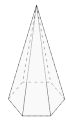
**1** What shape does this net represent?



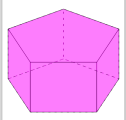
**a**



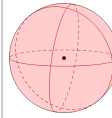
**b**



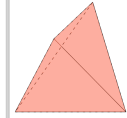
**c**



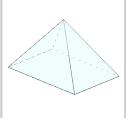
**d**



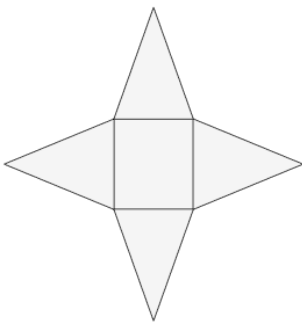
**e**



**f**



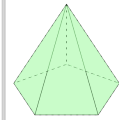
**2** What shape does this net represent?



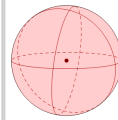
**a**



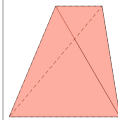
**b**



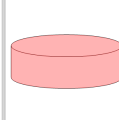
**c**



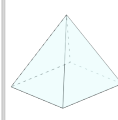
**d**



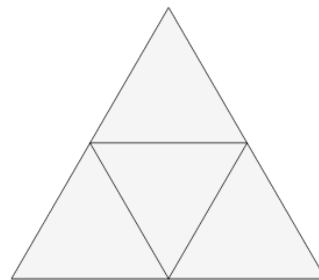
**e**



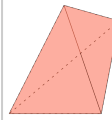
**f**



**3** What shape does this net represent?



**a**



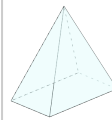
**b**



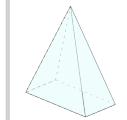
**c**



**d**



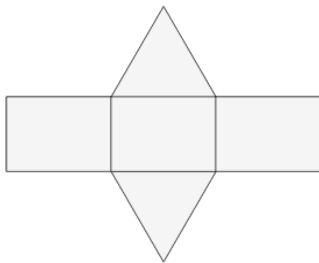
**e**



**f**



**4** What shape does this net represent?



**a**



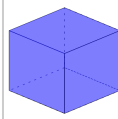
**b**



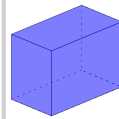
**c**



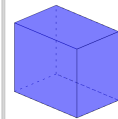
**d**



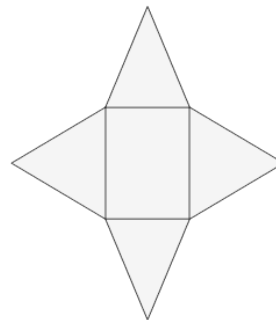
**e**



**f**



**5** What shape does this net represent?



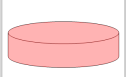
**a**



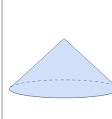
**b**



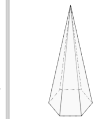
**c**



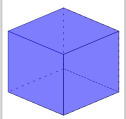
**d**



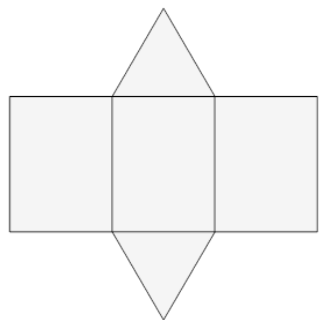
**e**



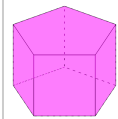
**f**



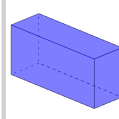
**6** What shape does this net represent?



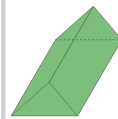
**a**



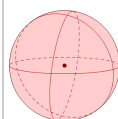
**b**



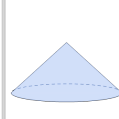
**c**



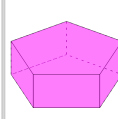
**d**



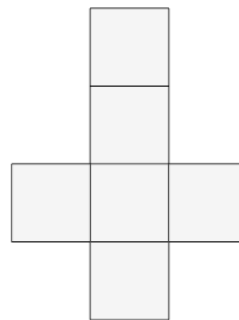
**e**



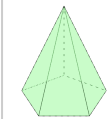
**f**



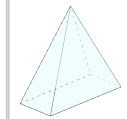
**7** What shape does this net represent?



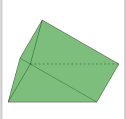
**a**



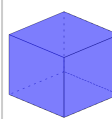
**b**



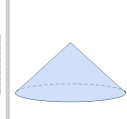
**c**



**d**



**e**



**f**

