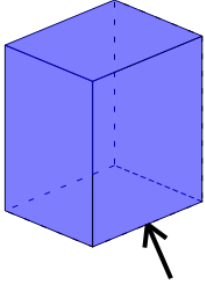




Math worksheet on '3D Shapes - Side, Vertex, Face Naming - Image to Name (Level 2)'. Part of a broader unit on 'Geometry Basics - Advanced'

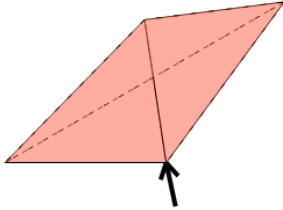
Learn online: [app.mobius.academy/math/units/geometry\\_basics\\_advanced/](http://app.mobius.academy/math/units/geometry_basics_advanced/)

**2** What is the arrow pointing to on this shape?



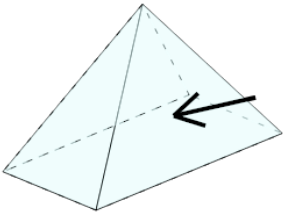
<b>a</b>	face	<b>b</b>	vertex
<b>c</b>	side		

**3** What is the arrow pointing to on this shape?



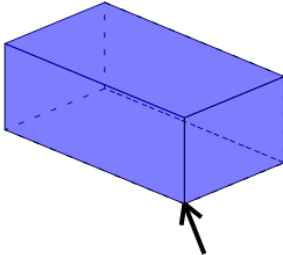
<b>a</b>	face	<b>b</b>	vertex
<b>c</b>	side		

**4** What is the arrow pointing to on this shape?



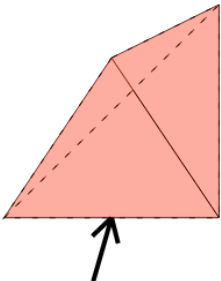
<b>a</b>	face	<b>b</b>	side
<b>c</b>	vertex		

**5** What is the arrow pointing to on this shape?



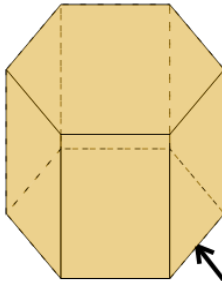
<b>a</b>	face	<b>b</b>	side
<b>c</b>	vertex		

**6** What is the arrow pointing to on this shape?



<b>a</b>	side	<b>b</b>	vertex
<b>c</b>	face		

**7** What is the arrow pointing to on this shape?



<b>a</b>	vertex	<b>b</b>	face
<b>c</b>	side		