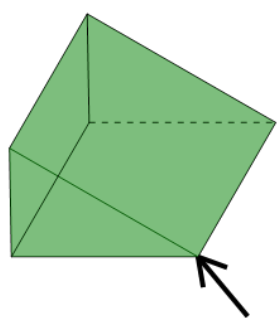




Math worksheet on '3D Shapes - Side, Vertex, Face Naming - Image to Yes/No (Level 1)'. Part of a broader unit on 'Geometry Basics - Advanced'

Learn online: [app.mobius.academy/math/units/geometry\\_basics\\_advanced/](http://app.mobius.academy/math/units/geometry_basics_advanced/)

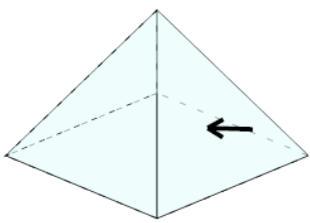
**1**



Is the arrow pointing to a face on this shape?

<b>a</b>	<b>b</b>
Yes	No

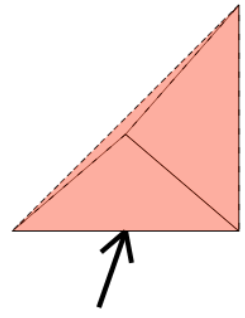
**2**



Is the arrow pointing to a face on this shape?

<b>a</b>	<b>b</b>
Yes	No

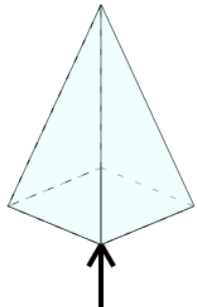
**3**



Is the arrow pointing to a vertex on this shape?

<b>a</b>	<b>b</b>
Yes	No

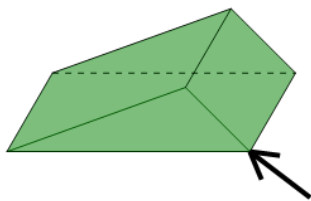
**4**



Is the arrow pointing to a side on this shape?

<b>a</b>	<b>b</b>
Yes	No

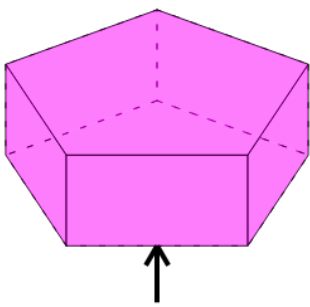
**5**



Is the arrow pointing to a vertex on this shape?

<b>a</b>	<b>b</b>
Yes	No

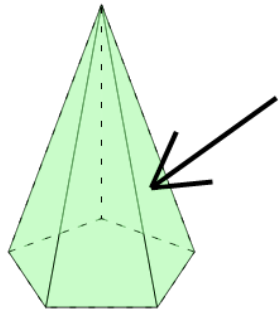
**6**



Is the arrow pointing to a side on this shape?

<b>a</b>	<b>b</b>
Yes	No

**7**



Is the arrow pointing to a face on this shape?

<b>a</b>	<b>b</b>
Yes	No