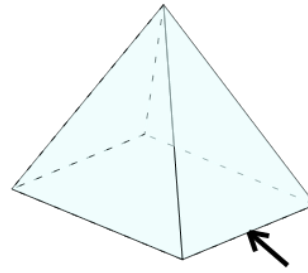




Math worksheet on '3D Shapes - Side, Vertex, Face Naming - Image to Yes/No (Level 2)'. Part of a broader unit on 'Geometry Basics - Advanced'

Learn online: [app.mobius.academy/math/units/geometry\\_basics\\_advanced/](http://app.mobius.academy/math/units/geometry_basics_advanced/)

1



Is the arrow pointing to a side on this shape?

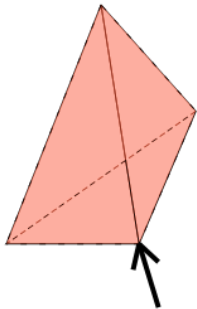
a

Yes

b

No

2



Is the arrow pointing to a side on this shape?

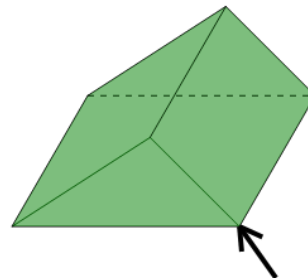
a

Yes

b

No

3



Is the arrow pointing to a vertex on this shape?

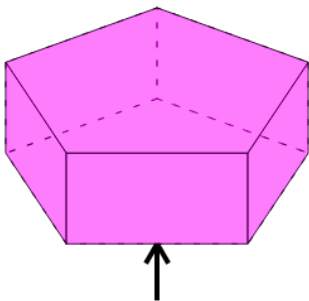
a

Yes

b

No

4



Is the arrow pointing to a vertex on this shape?

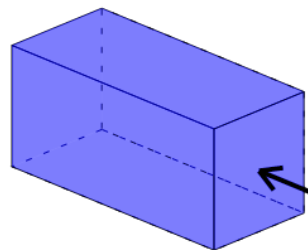
a

Yes

b

No

5



Is the arrow pointing to a side on this shape?

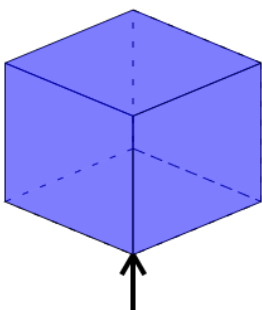
a

Yes

b

No

6



Is the arrow pointing to a face on this shape?

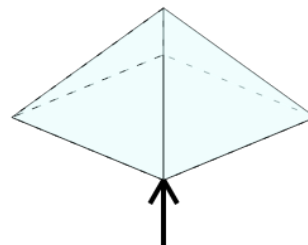
a

Yes

b

No

7



Is the arrow pointing to a vertex on this shape?

a

Yes

b

No