



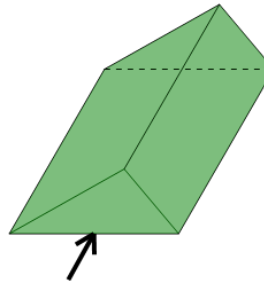
Math worksheet on '3D Shapes - Side, Vertex, Face Naming - Name to Image (Level 1)'. Part of a broader unit on 'Geometry Basics - Advanced'

Learn online: [app.mobius.academy/math/units/geometry\\_basics\\_advanced/](http://app.mobius.academy/math/units/geometry_basics_advanced/)

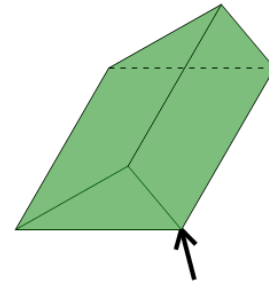
1 Which arrow is pointing to a side of the Triangular Prism?

Triangular Prism: side

a



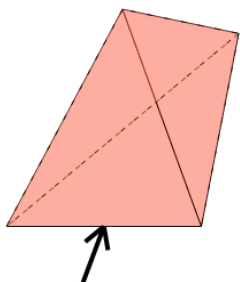
b



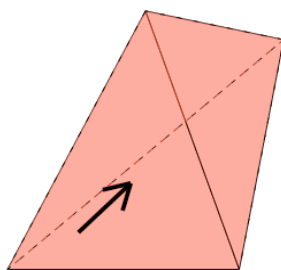
2 Which arrow is pointing to a face of the Tetrahedron?

Tetrahedron: face

a



b

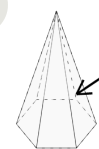


3

Which arrow is pointing to a vertex of the Hexagonal Pyramid?

Hexagonal Pyramid: vertex

a



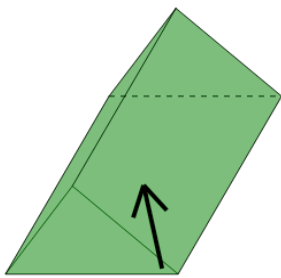
b



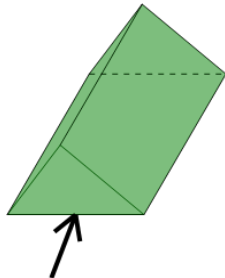
4 Which arrow is pointing to a face of the Triangular Prism?

Triangular Prism: face

a



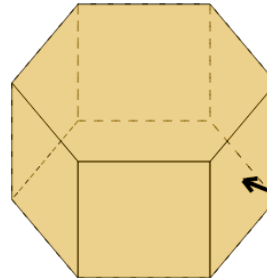
b



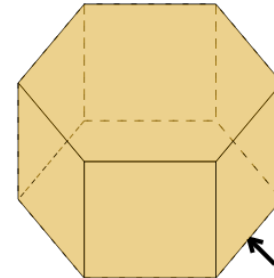
5 Which arrow is pointing to a face of the Hexagonal Prism?

Hexagonal Prism: face

a



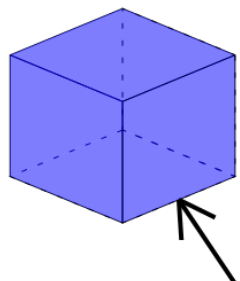
b



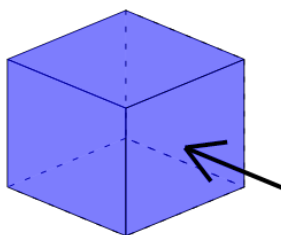
6 Which arrow is pointing to a face of the Cube?

Cube: face

a



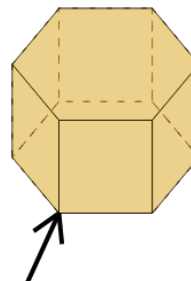
b



7 Which arrow is pointing to a vertex of the Hexagonal Prism?

Hexagonal Prism: vertex

a



b

