

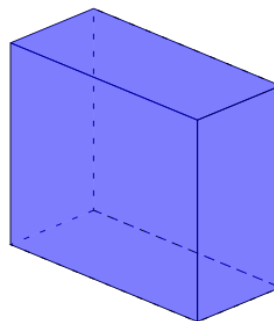


Math worksheet on 'Simple 3D Shapes (Level 1)'.
Part of a broader unit on 'Geometry Basics - Practice'

Learn online: app.mobius.academy/math/units/geometry_basics_practice/

1

Name the type of shape



a

Cylinder

b

Rectangular Prism

c

Cone

d

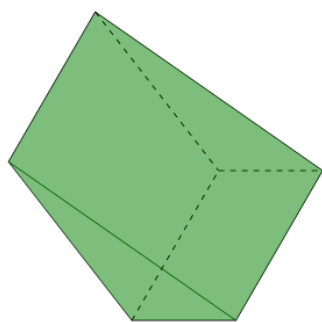
Sphere

e

Triangular Prism

2

Name the type of shape



a

Cube

b

Cylinder

c

Triangular Prism

d

Cone

e

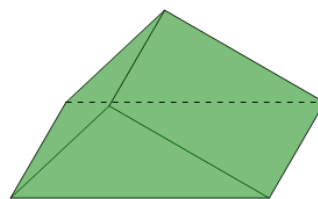
Rectangular Prism

f

Sphere

3

Name the type of shape



a

Rectangular Prism

b

Sphere

c

Cone

d

Cube

e

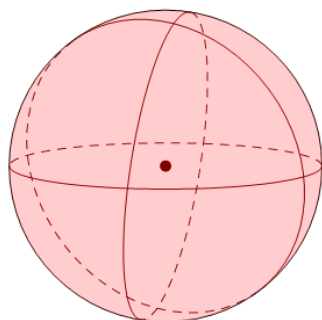
Cylinder

f

Triangular Prism

4

Name the type of shape



a

Sphere

b

Cone

c

Rectangular Prism

d

Cylinder

e

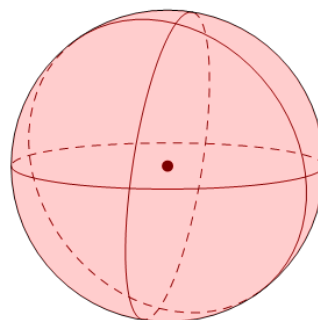
Triangular Prism

f

Cube

5

Name the type of shape



a

Cube

b

Sphere

c

Rectangular Prism

d

Cone

e

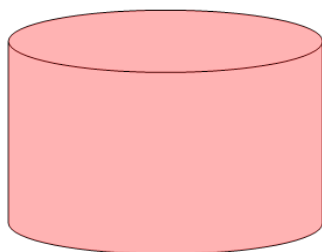
Cylinder

f

Triangular Prism

6

Name the type of shape



a

Cone

b

Cylinder

c

Cube

d

Sphere

e

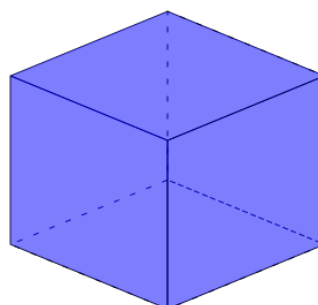
Rectangular Prism

f

Triangular Prism

7

Name the type of shape



a

Sphere

b

Cube

c

Cylinder

d

Triangular Prism

e

Cone