




Math worksheet on 'Is Shape a Parallelogram (from image) (Level 1)'. Part of a broader unit on 'Geometry Basics - Practice'

Learn online: [app.mobius.academy/math/units/geometry\\_basics\\_practice/](http://app.mobius.academy/math/units/geometry_basics_practice/)

**2**

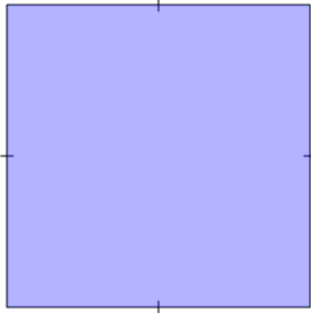
Is the shape a parallelogram



<b>a</b>	Parallelogram
<b>b</b>	Not a Parallelogram

**3**

Is the shape a parallelogram

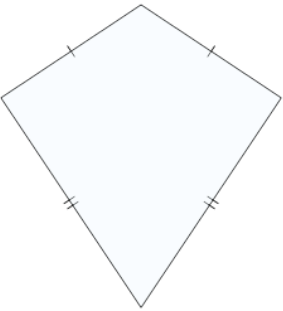


Is the shape a parallelogram

<b>a</b>	Parallelogram
<b>b</b>	Not a Parallelogram

**4**

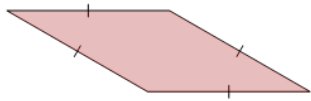
Is the shape a parallelogram



<b>a</b>	Parallelogram
<b>b</b>	Not a Parallelogram

**5**

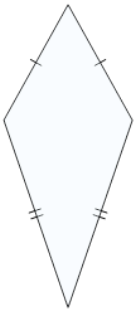
Is the shape a parallelogram



<b>a</b>	Parallelogram
<b>b</b>	Not a Parallelogram

**6**

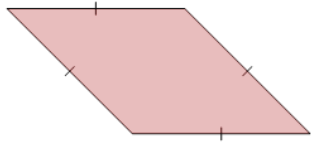
Is the shape a parallelogram



<b>a</b>	Parallelogram
<b>b</b>	Not a Parallelogram

**7**

Is the shape a parallelogram



<b>a</b>	Parallelogram
<b>b</b>	Not a Parallelogram