

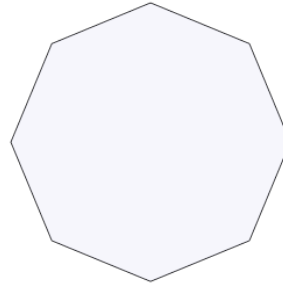


Math worksheet on 'Classifying Polygons by Sides and Regular or Irregular (Level 1)'. Part of a broader unit on 'Geometry Basics - Intro'

Learn online: [app.mobius.academy/math/units/geometry\\_basics/](http://app.mobius.academy/math/units/geometry_basics/)

1


Name the type of shape



- a Irregular octagon
- b Irregular pentagon
- c Regular octagon
- d Regular quadrilateral
- e Regular pentagon
- f Regular hexagon

2

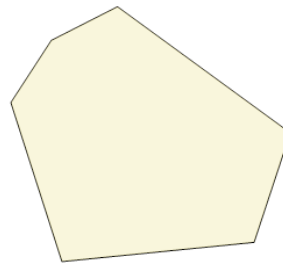
Name the type of shape



- a Regular hexagon
- b Regular quadrilateral
- c Irregular quadrilateral
- d Regular octagon
- e Irregular octagon
- f Regular pentagon

3

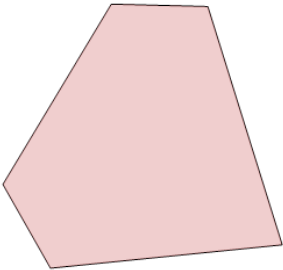
Name the type of shape



- a Regular quadrilateral
- b Irregular pentagon
- c Regular pentagon
- d Irregular hexagon
- e Regular hexagon
- f Irregular octagon

4

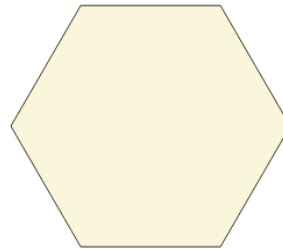
Name the type of shape



- a Irregular hexagon
- b Regular hexagon
- c Irregular pentagon
- d Regular octagon
- e Irregular octagon
- f Irregular quadrilateral

5

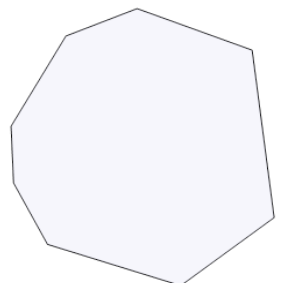
Name the type of shape



- a Regular pentagon
- b Irregular pentagon
- c Regular octagon
- d Regular hexagon
- e Irregular quadrilateral
- f Regular quadrilateral

6

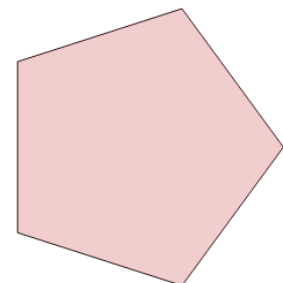
Name the type of shape



- a Regular pentagon
- b Irregular pentagon
- c Irregular octagon
- d Regular hexagon
- e Irregular quadrilateral
- f Regular quadrilateral

7

Name the type of shape



- a Regular hexagon
- b Irregular pentagon
- c Irregular quadrilateral
- d Irregular hexagon
- e Regular pentagon
- f Regular quadrilateral