




Classifying Polygons by Sides

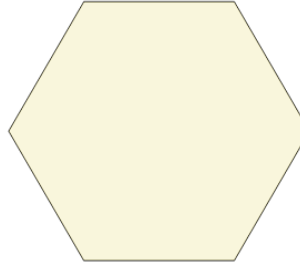


1 Name the type of shape



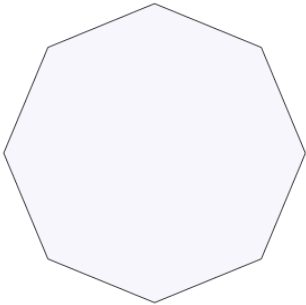
- | | |
|---|---------------|
| A | octagon |
| B | pentagon |
| C | quadrilateral |
| D | hexagon |

2 Name the type of shape



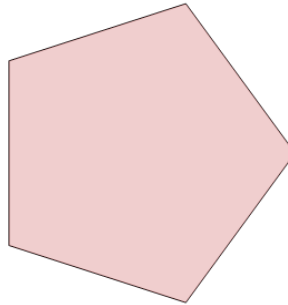
- | | |
|---|---------------|
| A | octagon |
| B | hexagon |
| C | quadrilateral |
| D | pentagon |

3 Name the type of shape



- | | |
|---|---------------|
| A | hexagon |
| B | quadrilateral |
| C | pentagon |
| D | octagon |

4 Name the type of shape



- | | |
|---|---------------|
| A | octagon |
| B | quadrilateral |
| C | pentagon |
| D | hexagon |