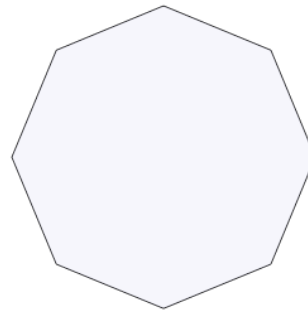




Math worksheet on 'Classifying Polygons as Regular or Irregular (Level 1)'. Part of a broader unit on 'Geometry Basics - Practice'

Learn online: [app.mobius.academy/math/units/geometry\\_basics\\_practice/](http://app.mobius.academy/math/units/geometry_basics_practice/)

1



Name the type of shape

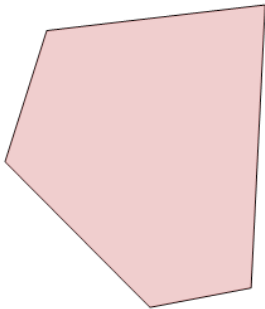
a

Regular

b

Irregular

2



Name the type of shape


a

Regular

b

Irregular

3



Name the type of shape

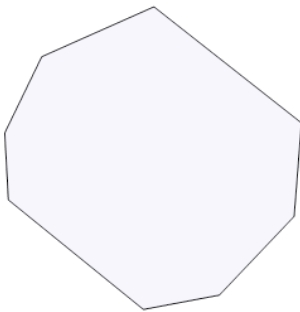
a

Regular

b

Irregular

4



Name the type of shape

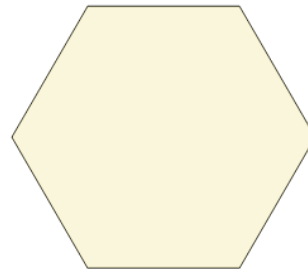
a

Regular

b

Irregular

5



Name the type of shape

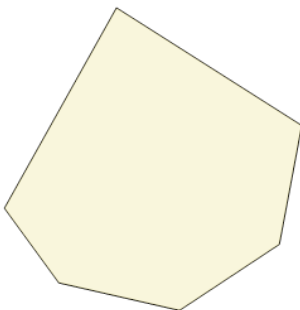
a

Regular

b

Irregular

6



Name the type of shape


a

Regular

b

Irregular

7



Name the type of shape

a

Regular

b

Irregular